

**CAREERS** 360  
PREPARATION **Series**

**SEED 2024**

---


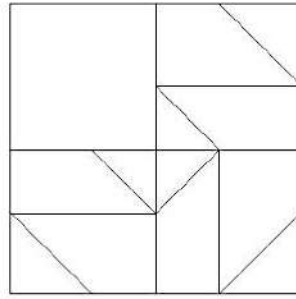
Sample Papers

---


## SID | Sample Paper 1

1. \_\_\_\_\_ is the movement or natural eye flow caused by the regular reoccurrence of the related element.
  - a) Rhythm\*
  - b) Shape
  - c) Unity
  - d) Perspective
  
2. The relationship of size between objects and the space the object occupies is \_\_\_\_\_.
  - a) Balance
  - b) Perspective
  - c) Proportion\*
  - d) Space
  
3. \_\_\_\_\_ is the range of visible wavelengths from red through the spectrum to violet, perceivable by the eye and the brain.
  - a) Distance
  - b) Perspective
  - c) Color\*
  - d) Size
  
4. Brightness or dullness of a Hue is called as \_\_\_\_\_.
  - a) Intensity\*
  - b) Tints
  - c) Shades
  - d) Density

5. Select a suitable figure from the following options that will fit in the picture below?




a)\*



b)



c)



d)


6. The visible and tactile surface of a substance or material is known as \_\_\_\_\_.

- a) Texture\*
- b) Smooth
- c) Rough
- d) Spiky

7. The equilibrium of the elements of design is \_\_\_\_\_.

- a) Action
- b) Color
- c) Balance\*
- d) Distance

8. Select a suitable figure from the following options that will fit in the picture below?



a)



b)



c)



d)\*


9. \_\_\_\_\_ governs the eye movement in design.

- a) Body
- b) Eyelids
- c) Flow
- d) Rhythm\*

10. Texture involves three senses \_\_\_\_\_.

- a) Smell, Touch, Taste
- b) Touch, Sight, Sound\*
- c) Sound, Smell, Taste
- d) Sight, Smell, Sound

11. How many animals are there in the picture below?



- a) 6\*                      b) 4                      c) 8                      d) 7

12. A \_\_\_\_\_ is a simple designed figure, which is usually representative of a particular period of design, style or culture.

- a) Design
- b) Shape
- c) Motif\*
- d) Texture

13. Find the mirror image of the picture given below.





a)



b)\*



c)



d)

14. When objects look similar to one another, people often perceive them as?

- a) Balanced
- b) Harmony
- c) Group or Pattern\*
- d) Closure

15. Simplicity and logical sequence promotes \_\_\_\_\_.

- a) Awareness
- b) Cleanliness
- c) Neatness
- d) Clarity\*

16. Emphasis given to an element of design adds \_\_\_\_\_ to the element.

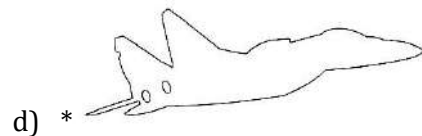
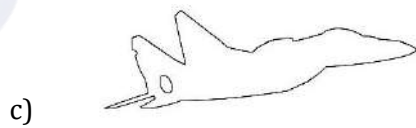

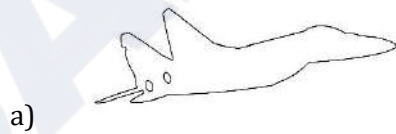
- a) Grace
- b) Greatness
- c) Dominance\*
- d) Border

17. We have a glimpse of four sides of the roof. How many sides are there in real?




- a) 4
- b) 6
- c) 7
- d) 8\*

18. Find the correct contour line for the image given below from the options given.



19. How many triangles are there in the picture?



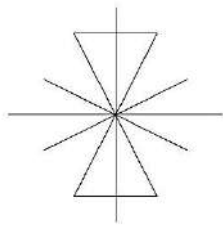
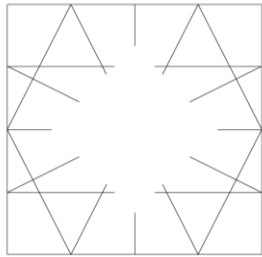
- a) 3
- b) 5\*
- c) 4
- d) 6

20. In the visual given below on the far right the figure becomes a Focal Point because it is \_\_\_\_\_ to the other.

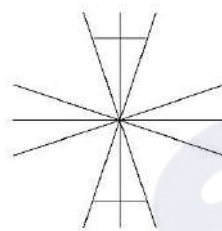


- a) Dissimilar\*
- b) Closure
- c) Rhythm
- d) Asymmetrical balance

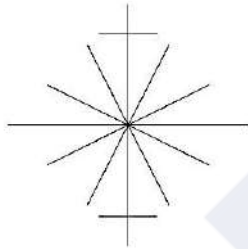
21. Select the suitable figure from the following options that will fit in the below given picture?



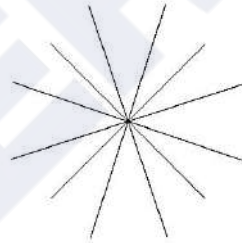
a)



b)



c) \*



d)

22. What does the two 'O's depict?

**LOOK**

- a) Nose
- b) Ears
- c) Eyes\*
- d) Bicycle

23. How many birds are there in the picture?



- a) 12      b) 13      c) 11\*      d) 10

24. Select the most suitable Typeface for printing "Happy Birthday" on a greeting card for age group 8 – 12 years.

a. **A b c d e f g h i j k l m n**

c. **A b c d e f g h i j k l m n**

b. *A b c d e f g h i j k l m n*

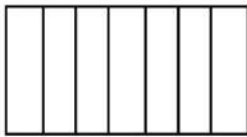
d. **A B C D E F G H I J K L M N**

- a. (\*)    b.    c.    d

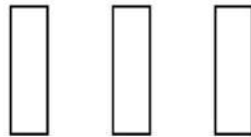
25. What is the image seen if a person views the 3-Dimensional letter "W" from top view?



Letter "W" in 3 dimensional form.



a



b



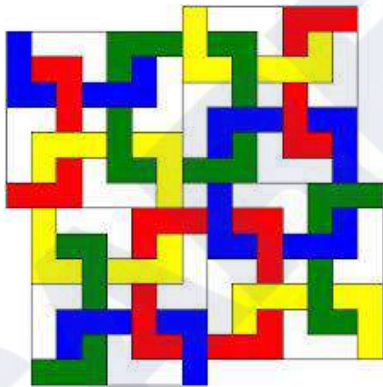
c



d

a. (\*) b. c. d.

26. How many complete square Polygons are there in the given image?



- a) 6
- b) 8
- c) 9\*
- d) 11

27. Which of the following is completely true for the given traditional graphic image?



- a) Repetition\*
- b) Mirror image
- c) Symmetry
- d) Dynamic

28. The image depicts a column Structure belonging to \_\_\_\_\_.



- a) Roman architecture \*
- b) Chinese architecture
- c) Egyptian Architecture
- d) None of the above

29. The given architectural feature belongs to which of the following:



- a) Mosque
- b) Church
- c) Jain Temple
- d) Gurudwara\*

30. Which of the following is not an essential feature of Islamic Architecture?

- a) Minaret
- b) Pictures\*
- c) Calligraphy
- d) Dome

31. An area created by a closed line is .....

- a) Value
- b) Texture
- c) Space
- d) Shape\*

32. Which layer is in the front?



- a) Red
- b) Blue
- c) White
- d) Red and White\*

33. Which country does this jewelry belong to?



- a) Egypt
- b) Africa\*
- c) China
- d) India

34. Which of the following best suits the image of furniture?



- a) Rhythm
- b) Movement
- c) Asymmetry\*
- d) Smooth

35. \_\_\_\_\_ is an origin of line.

- a) Shape
- b) Texture
- c) Dot\*
- d) Color

36. Polygon has \_\_\_\_\_ sides.

- a) Four
- b) More Than Three\*
- c) Less Than Three
- d) Twelve

37. Two lines equidistance from each other means they are \_\_\_\_\_.

- a) Similar
- b) Long
- c) Short
- d) Parallel\*

38. A tetrahedron has \_\_\_\_\_ faces
- a) Three
  - b) Four\*
  - c) Five
  - d) Six
39. Contours help us to understand the \_\_\_\_\_ of the object.
- a) Color
  - b) Outline\*
  - c) Boldness
  - d) Thinness

40. Vertical lines means \_\_\_\_\_.
- a) Intensity
  - b) Flexibility
  - c) Stability\*
  - d) Mobility

41. How many kinds of different polygons do this JALI (Net) has?



- a) One
- b) Two\*
- c) Three
- d) Four

42. A crash bar is also known as \_\_\_\_\_.



- a) Pull handle
- b) Lift handle
- c) Push handle\*
- d) None of the above

43. What is this architectural element called?



- a) Skylight\*
- b) Roof window
- c) Roof glass
- d) Roof cutout

44. Which structure in India has this predominant element shown in the image?



- a) Forts in Rajasthan
- b) Temples in Orissa
- c) Temples in Tamil Nadu\*
- d) Temples in Punjab

45. Where can you possibly locate the given article?



- a) Goa
- b) Fatehpur Sikri\*
- c) Kochi
- d) Bhuvaneshwar

46. Revolving Doors have benefit as it \_\_\_\_\_.
- a) keeps out cold air and helps to drive down heating costs
  - b) soundproofs the lobby of a building
  - c) eliminates the slamming of doors
  - d) All of above\*

47. What does 'HBO' stand for?
- a) High Bandwidth Output
  - b) Hollywood Bollywood Organization
  - c) Hollywood Broadcasting Office
  - d) Home Box Office\*

48. Identify the logo in the given picture.




- a) The X Files
  - b) AXN\*
  - c) Extreme Sports
  - d) Express Courier
49. Who is the creator of Graphic Novel '300'?
- a) Zack Snyder
  - b) Frank Miller\*
  - c) Oliver Jeffers
  - d) Jim Lee

50. Identify the logo in the given picture.



- a) Volkswagen
- b) National Golf Club
- c) Bajaj Motorcycles\*
- d) Hockey

51. Identify the logo in the given picture.



- a) Data Corporation
- b) Chanel
- c) Dolce & Gabbana
- d) DC Comics\*

52. In the animated film How to Train Your Dragon, the protagonist is a \_\_\_\_\_.

- a) Viking\*
- b) Athlete
- c) Prince
- d) Warrior

53. Identify the logo in the given picture.



- a) WeChat
- b) Hike Messenger
- c) Vine
- d) WhatsApp\*

54. What is the next letter in this sequence J F M A M J \_\_\_?

- a) P
- b) S
- c) J\*
- d) T


55. A Hue is \_\_\_\_\_.

- a) A pure colour\*
- b) A colour with added white
- c) A colour with added grey
- d) A bottled colour

56. Analogous colour of Blue Violet is \_\_\_\_\_.

- a) Yellow
- b) Yellow Orange
- c) Orange
- d) Red\*

57. Which direction is the Indian bus traveling?



- a) To the right\*
- b) To the left
- c) Both the above is true
- d) None of the above is true

58. The painting technique to create textures by applying thick is called as \_\_\_\_\_.

- a) Impasto\*
- b) Textural Painting
- c) Heavy colouring
- d) Rough Colouring

59. Cast Shadow is on the \_\_\_\_\_.

- a) Opposite side of the light\*
- b) Nearby the light
- c) On the object's surface
- d) None of the above

60. What is more accurate? Blue, Violet and Green are \_\_\_\_\_.

- a) Natural Colours
- b) Soothing colours
- c) Cool Colours\*
- d) Fresh Colours

61. What is not a Hue from the following \_\_\_\_\_.
- a) Pista\*
  - b) Purple
  - c) Blue Green
  - d) Green
62. Analogous of Red-Orange Hue is \_\_\_\_\_.
- a) Blue
  - b) Green
  - c) Violet
  - d) None of the above\*
63. Due to the property of 'Saturation' the colours may appear\_\_\_\_\_.
- a) Solid
  - b) Heavy
  - c) Bright or Dull\*
  - d) Meaningful
64. Poster Colours are considered to be \_\_\_\_\_ medium.
- a) Opaque\*
  - b) Bottled
  - c) Vibrant
  - d) None of the above
65. The movie series Lord of The Rings is based on the works by \_\_\_\_\_.
- a) Homer
  - b) Tolkien\*
  - c) Plato
  - d) Kalidas

66. Which company logo is this?



- a) Himalaya
- b) Patanjali
- c) Ayurvedeeya Arkashala
- d) Dabur\*

67. What does this astronomical symbol mean for?



- a) Earth\*
- b) Neptune
- c) Venus
- d) Mars

68. What is this arranged instrument?



- a) Arrangement of bowls
- b) Jaltarang\*
- c) Music & water
- d) None of the above

69. Following picture is the signage of \_\_\_\_\_.



- a) School ahead
- b) Runaway
- c) Run behind
- d) Exit\*

70. The following silhouettes are inspired from which technique?



- a) Kirigami
- b) Origami\*
- c) Quilling
- d) None of the above

71. Identify the car from the silhouette.



- a) Mini Cooper\*
- b) Maruti 800
- c) Santro
- d) Maruti Swift

72. The following form of martial art belongs to which South Indian state?



- a) Karnataka
- b) Andhra Pradesh
- c) Kerala\*
- d) Tamil Nadu

73. The chair of following silhouette is most suitable for...



- a) Office
- b) Bedroom
- c) Bar
- d) Poolside\*

74. Which of the following is not correctly matched?

- a) Bhangra-Punjab
- b) Bihu-Nagaland\*
- c) Garba-Gujarat
- d) Tamasha-Maharashtra

## SID | Sample paper 2

1. This palace in Transylvania, Romania is the setting for which widely enjoyed work of horror fiction?



- a) Carrie by Stephen King
  - b) Dracula by Bram Stoker\*
  - c) Strange case of Dr. Jekyll and Mr. Hyde by R. L. Stevenson
  - d) Frankenstein by Mary Shelley
2. Recognize this folk art of storytelling.



- a) Kawad\*
  - b) Patachitra
  - c) Warli
  - d) Madhubani
3. Identify this step-well, which is also a World Heritage Site.



- a) Agasen ki Baoli
- b) Raniji ki Baori
- c) Rajon ki Baoli
- d) Rani ki Vav\*

4. Hollywood movie 'The Theory of Everything' is a biographical film based on the life of which well-known British scientist?



- a) Stephen Hawking\*
- b) John Nash
- c) Tim Berners-Lee
- d) Jocelyn Bell Burnell

5. Maoris; the indigenous people of New Zealand use a traditional form of tattooing to signify rank and status of a person. What is this permanent marking called?



- a) Ta Moko\*
- b) Pe'a
- c) Katakana
- d) Antigua

6. What is the Indonesian technique of producing intricate patterns by wax-resist dyeing fabric called?



- a) Block printing
- b) Bandhani
- c) Embroidery
- d) Batik\*

7. Identify this Varanasi born duo of Hindustani Classical vocalists who are also brothers.



- a) Rajan and Sajan Mishra\*
- b) Umakant and Ramakant Gundecha
- c) Ganesh and Kumaresh
- d) Fateh Ali and Murad Ali

8. This indigenous South African music instrument was widely used to produce an annoying sound during the Football world Cup 2013. What is it?



- a) Xosa Uhadi
- b) Akadinda
- c) Cununo
- d) Vuvuzela\*

9. Identify the home country of this newly wedded couple.



- a) Indonesia
- b) Bahrain
- c) Sri Lanka\*
- d) Thailand

10. You can use the numbers 3, 4, 5 as often as you wish. You can use the basic mathematical operations: plus, minus, division, multiplication. In how many different ways can you arrange the numbers to give the exact total of 30?

- a) 4\*
- b) 6
- c) 2
- d) 8

11. Which of the following pairs have no association with each other?

- a) Garage and dark
- b) Law and delay
- c) Computer and thinking\*
- d) Bat and night

12. Oar is to rowboat as foot is to.....

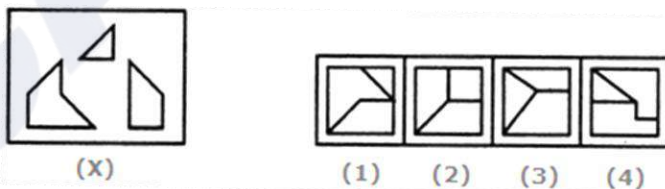
- a) Running
- b) Sneaker
- c) Skateboard\*
- d) Jumping

13. Find the statement that must be true according to the given information.

"Erin is twelve years old. For three years, she has been asking her parents for a dog. Her parents have told her that they believe a dog would not be happy in an apartment, but they have given her permission to have a bird. Erin has not yet decided what kind of bird she would like to have".

- a) Erin's parents like birds better than they like dogs
- b) Erin does not like birds
- c) Erin and her parents live in an apartment\*
- d) Erin and her parents would like to move

14. Find out which of the figures (1), (2), (3) and (4) can be formed from the pieces given in figure (X).



- a) 1\*
- b) 2
- c) 3
- d) 4

15. Look carefully at the sequence of symbols to find the pattern. Select the correct option to complete the pattern.



- a) 1
- b) 2
- c) 3\*
- d) 4

16. Choose the pair from the options given that best represents a similar relationship to the one expressed in the original pair of words.

DEPENDABLE : CAPRICIOUS

- a) Fallible : Cantankerous
- b) Erasable : Obtuse
- c) Malleable : Limpid
- d) Capable : Inept\*

17. Find the word that names a necessary part of the underlined word.

Hurricane

- a) Beach
- b) Cyclone
- c) Damage
- d) Wind\*

18. Here are some words translated from an artificial language.

*lelibroon* means yellow hat,

*plekafroti* means flower garden,

*frotimix* means garden salad.

Which word could mean "yellow flower"?

- a) Lelifroti
- b) Lelipleka\*
- c) Plekabroon
- d) Frotibroon

19. 'Sports' is related to 'logo' in the same way as 'Nation' is related to.....

- a) Anthem
- b) Emblem\*
- c) Ruler
- d) None of these

20. Arrange the words given below in a meaningful sequence.

1. Elephant    2. Cat    3. Mosquito    4. Tiger    5. Whale

- a) 5, 3, 1, 2, 4
- b) 1, 3, 5, 4, 2
- c) 3, 2, 4, 1, 5\*
- d) 2, 5, 1, 4, 3

21. You have spent the last 48 hours on a creative brief and your brain seems to have frozen. You need to find a title for a new Disney movie on 'talking furniture'. Keeping the design process in mind what would your next resort be?

- a) Scan a magazine
- b) Lateral thinking\*
- c) Vertical Thinking
- d) Buy yourself more time

22. Copywriter, Account manager, flyposting, hard sell, livery, viral marketing are words associated with which of the following?

- a) Advertising\*
- b) Public relations

- c) Branding
- d) Marketing

23. Predators, Deciduous, Temperate, Habitat, Canopy, War-bler and Adaptation are the words associated with which of the following?

- a) Forest\*
- b) Wild life
- c) Urban life
- d) Rural life

24. Associate the following pictures with one of the moods given below:



- a) Anger
- b) Youthful
- c) Melancholic\*
- d) Agitated

25. 'Kalaghoda Art Festival' is celebrated at one of the following cities,

- a) Pune
- b) Mumbai\*
- c) Aurangabad
- d) Hyderabad

26. The 'Sistine Chapel' ceiling was painted by

- a) Rembrandt
- b) Vermeer
- c) Michelangelo\*
- d) Picasso

27. To which deity is the main temple at Konark dedicated?

- a) Lord Shiva
- b) Goddess Parvati
- c) Lord Ganesha
- d) Surya or Sun God\*

28. Bodo, Konkoni, Dogri, Maithali and Santhali are all.....

- a) States
- b) Languages\*
- c) Dance forms
- d) Games

29. Red is symbolic of Marriage in India, in the Western countries it is .....

- a) Purple
- b) Black
- c) Cream
- d) White\*

30. Koya, Toda, Korku, Santhal and Gond are.....

- a) Tribal Art Styles\*
- b) Names of People
- c) Names of Tribal Communities
- d) Names of Villages

31. Manuscripts in Europe were first written on.....

- a) Paper
- b) Papyrus
- c) Vellum\*
- d) Palm

32. He is known as the Father of Indian Animation.

- a) Ram Mohan\*

- b) Walt Disney
  - c) Anant Pai
  - d) Dhimant Vyas
33. Which of these animals is not on the Ashoka Pillar at Sarnath?
- a) Horse
  - b) Elephant
  - c) Bull
  - d) Tiger\*
34. The first form of block printing was done in.....
- a) Mohenjo-daro
  - b) China\*
  - c) Greece
  - d) Mesopotamia
35. The Charkha is a symbol of.....
- a) Non-violence
  - b) Swaraj
  - c) Swadeshi\*
  - d) Partition
36. Zari is made from.....
- a) Silk
  - b) Metal\*
  - c) Cotton
  - d) Beads
37. Biodegradable waste should be.....
- a) Incinerated
  - b) Composted\*
  - c) Land filled

d) Dumped

38. What among the followings is not considered a clean source of energy?

- a) Hydro Power
- b) Wind Power
- c) Nuclear Power\*
- d) Solar Power

39. The statuette of the Dancing Girl came from.....



- a) Mohenjo-daro\*
- b) China
- c) Greece
- d) Mesopotamia

For Questions 40 to 42, refer to the color image 'A' shown below:



40. The above work in Image 'A' is popularly known as....
- a) Ballerina
  - b) Monalisa
  - c) Bani-Thani
  - d) Padmapani\*
41. Approximately how old is this artifact shown in Image 'A' above?
- a) 18<sup>th</sup> Century
  - b) 7<sup>th</sup> Century
  - c) 20<sup>th</sup> Century
  - d) 2nd century BCE to about 650 CE\*
42. What is the material of this artifact shown in Image 'A' above?
- a) Court Led Mural Paintings\*
  - b) Impressionist Paintings
  - c) Surrealist Paintings
  - d) Abstract Paintings

43. The following is an example of.....



- a) Miniature painting from Rajasthan
- b) Tanjore painting from Karnataka
- c) Kalamkari from Andhra Pradesh
- d) Gond Art from Central India\*

44. Art Nouveau evolved during..... period.

- a) 1700-1800
- b) 1600-1700
- c) 1885-1910\*
- d) 2000-2010

45. "Internet Art" evolved during.....

- a) 14th Century
- b) 15th Century
- c) Late 20th Century\*
- d) Early 17th Century

46. The famous quote, "have nothing in your homes that you do not know to be useful or believe to be beautiful" is by.....

- a) William Morris\*
- b) Philip Webb

- c) Michael Angelo
  - d) Socrates
47. Who is known as founder of Calendar Art in India?
- a) Vasudeo Gaitonde
  - b) Lord Bentinck
  - c) MF Husain
  - d) Raja Ravi Varma\*
48. Select the arrangement of the art movements in order of their existence in the Western Art during 1150 to 1600 from the options below.
- a) Northern Renaissance, Gothic Art, the High Renaissance and Mannerism
  - b) Gothic Art, the High Renaissance and Mannerism, Northern Renaissance
  - c) High Renaissance, Mannerism, Gothic Art, Northern Renaissance
  - d) Gothic Art, the High Renaissance, Mannerism and the Northern Renaissance\*
49. Who is the famous Architect Designer, who said, "The mother of all art is architecture. Without architecture of our own we have no soul of our own civilization"?
- a) Charles Eames
  - b) Frank Lloyd Wright\*
  - c) B V Doshi
  - d) Antoni Gaudi
50. 'Art Deco' was characterized by.....
- a) Curvilinear lines
  - b) Organic Motifs
  - c) Geometrical Shapes\*
  - d) Natural Early Material
51. Rising air tends to.....
- a) expand and become cooler\*
  - b) expand and become warmer

- c) become denser and warmer
  - d) become denser and cooler
52. Good electrical insulators are usually.....
- a) good thermal conductors
  - b) poor thermal conductors\*
  - c) good electrical conductors
  - d) poor thermal insulators
53. The colors seen in a rainbow.....
- a) are produced by raindrops of different shapes
  - b) are the colors of the different atoms that make up water
  - c) are the colors of the different molecules that make up water
  - d) are produced when sunlight is refracted by raindrops\*
54. What is the property of a moving object to continue moving is called?
- a) Velocity
  - b) Speed
  - c) Acceleration
  - d) Inertia\*
55. A grocer has a sale of Rs. 6435, Rs. 6927, Rs. 6855, Rs. 7230 and Rs. 6562 for 5 consecutive months. How much sale must he have in the sixth month so that he gets an average sale of Rs. 6500?
- a) 5000
  - b) 5200
  - c) 5100
  - d) 4991\*
56. A rectangular plot measuring 90 meters by 50 meters needs to be enclosed by wire fencing such that poles of the fence will be kept 5 meters apart. How many poles will be needed?

- a) 26
- b) 56\*
- c) 55
- d) 38

57. How many times in a day, are the hands of a clock in straight line but opposite in direction?

- a) 24
- b) 22\*
- c) 18
- d) 15

58. Coir craft mat is made of which material?

- a) Wood
- b) Coconut husk\*
- c) Bamboo
- d) Grass

59. What place of India does this pottery belong to?



- a) Khurja
- b) Firozabad
- c) Chennai
- d) Jaipur\*

60. What are these beads made of?



- a) Glass
- b) Stone\*
- c) Clay
- d) Wood

61. What type of craft is Meenakari?

- a) Carving
- b) Beating
- c) Casting
- d) Enamelling\*

62. What is applique work?

- a) Wooden craft
- b) Papier-mâché craft
- c) Textile craft\*
- d) Stone carving

63. What material is used to make this craft item?



- a) Cane
- b) Bamboo

- c) Wood
- d) Grass\*

64. What material is used to make this craft item?



- a) Paper
- b) Wood
- c) Leather\*
- d) Cloth

65. Which of these is not an eco-friendly material?

- a) Wood
- b) Plastic\*
- c) Bamboo
- d) Stone

66. What is the material used for this craft?



- a) Paper Mache
- b) Stone
- c) Coconut shell\*
- d) Metal

67. What is the material used to make these 'Sawantwadi' (A place in Maharashtra State) toy craft?



- a) Metal
  - b) Grass
  - c) Wood\*
  - d) Paper
68. What material are these bangles made of?



- a) Conch shell\*
  - b) Plastic
  - c) Bamboo
  - d) Marble
69. Which company made the first commercial portable cell phone in the year 1983?
- a) Nokia
  - b) Motorola\*
  - c) Apple
  - d) Samsung

70. The technology that interpret bodily motion to mathematical algorithms is.....

- a) Touch technology
- b) Bluetooth
- c) Gesture technology\*
- d) Infrared

71. What is IoT?

- a) Information of Technology
- b) Internet of Things\*
- c) Industries of Technology
- d) An apple product

72. Which of the following defines Haptic Technology?

- a) Is tactile feedback technology which recreates the sense of Smell
- b) Is tactile feedback technology which recreates the sense of touch\*
- c) Is tactile feedback technology which recreates the sense of Fear
- d) Is tactile feedback technology which recreates the sense of Vision

73. A device designed to replace a missing part of the body is called.....

- a) Prosthesis\*
- b) Kinesthesia
- c) Chemesthesia
- d) Electro-thesis

74. What is not associated with digital video?

- a) Codec
- b) Modem\*
- c) Graphics card
- d) Editing software

75. How does one get blue colour digitally while using RGB colour mode?

- a) Adding Lemon yellow value to green
- b) Blue cannot be mixed as its pure colour\*
- c) Subtracting yellow values from Green
- d) None of above

CAREERS360

## SID | Sample Paper 3

1. Identify this World Heritage Site.



- a) Angkor Wat\*
  - b) Macho Pichu
  - c) Campeche
  - d) Cappadocia
2. According to rules, the color of Soccer goal post is \_\_\_\_\_.
- a) Red
  - b) Yellow
  - c) White\*
  - d) Black
3. Identify the musical instrument.



- a) Sarangi
  - b) Dotara
  - c) Sitar
  - d) Iktara\*
4. Who among the following is a famous Santoor player?
- a) Hari Prasad Chaurasiya
  - b) Ravi Shankar
  - c) Zakir Hussain
  - d) Shiv Kumar Sharma\*
5. Who founded the motion picture visual effects company, 'Industrial light and magic'?
- a) Walt Disney
  - b) George Lucas\*
  - c) David Fincher
  - d) Peter Jackson

6. The following silhouette is from which monument?



- a) Humanyun's Tomb
- b) Sanchi Stupa\*
- c) Shanti Stupa
- d) Dhamek Stupa

7. Identify this dance form from Kerala.



- a) Koodiyattam
- b) Kathakali
- c) Mohiniyattam\*
- d) Theyyam

8. This dance form belongs to which country?



- a) Malaysia
- b) Indonesia
- c) Korea\*
- d) Thailand

9. This energetic dance form is native to Spain. What is this called?



- a) Salsa
- b) Samba
- c) Belly Dance
- d) Flamenco\*

10. Here are some words translated from an artificial language.

*moolokarn* means blue sky,

*wilkospadi* means bicycle race,

*moolowilko* means blue bicycle.

Which word could mean "racecar"?

- a) Wilkozwet
- b) Spadiwilko
- c) Moolobreil
- d) Spadivolo\*

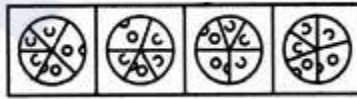
11. Pride is to Lion as School is to \_\_\_\_\_.

- a) Teacher
- b) Student
- c) Self-Respect \*
- d) Fish

12. Find out which of the figures (1), (2), (3) and (4) can be formed from the pieces given in figure (X).



(X)



(1)

(2)

(3)

(4)

- a) 1
- b) 2
- c) 3\*
- d) 4

13. Fact 1: All dogs like to run.  
Fact 2: Some dogs like to swim.  
Fact 3: Some dogs look like their masters.

If the first three statements are facts, which of the following statements must also be a fact?

- I. All dogs who like to swim look like their masters.
  - II. Dogs who like to swim also like to run.
  - III. Dogs who like to run do not look like their masters.
- a) I only  
b) II only\*  
c) II and III only  
d) None of the statements is a known fact
14. A four-person crew from Classic Colors is painting Mr. Field's house. Michael is painting the front of the house. Ross is in the alley behind the house painting the back. Jed is painting the window frames on the north side, Shawn is on the south. If Michael switches places with Jed, and Jed then switches places with Shawn, where is Shawn?
- a) In the alley behind the house  
b) On the North side of the house  
c) In front of the house\*  
d) On the south side of the house
15. BANK is related to MONEY in the same way as TRANSPORT is related to \_\_\_\_\_.
- a) Goods\*  
b) Road  
c) Movement  
d) Traffic

16. Look carefully at the sequence of symbols to find the pattern. Select correct pattern.

E m E | m m m | E W E | W ? W

          
m      E      W      E  
(1)    (2)    (3)    (4)

- a) 1
- b) 2
- c) 3\*
- d) 4

17. Look at this series: 36, 34, 30, 28, 24, \_\_\_\_\_. What number should come next?

- a) 20
- b) 22\*
- c) 23
- d) 26

18. Look at this series: 544, 509, 474, 439, \_\_\_\_\_. What number should come next?

- a) 404\*
- b) 414
- c) 420
- d) 445

19. Look carefully for the pattern, and then choose which pair of numbers comes next.

28, 25, 5, 21, 18, 5, 14 \_\_, \_\_.

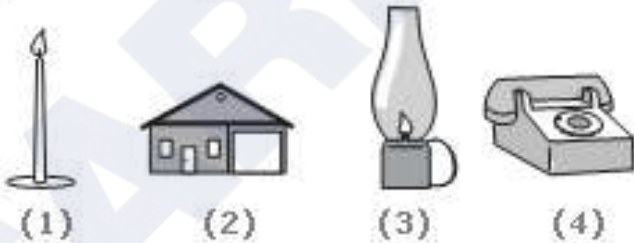
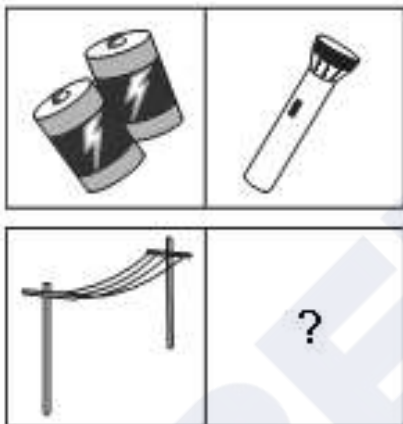
- a) 11, 5\*
- b) 10, 7
- c) 11, 8
- d) 5, 10

20. Arrange the words given below in a meaningful sequence.

- 1. Police
- 2. Punishment
- 3. Crime
- 4. Judge
- 5. Judgment


- a) 3, 1, 2, 4, 5
- b) 1, 2, 4, 3, 5
- c) 5, 4, 3, 2, 1
- d) 3, 1, 4, 5, 2\*

21. Choose the picture that would go in the empty box so that the two bottom pictures are related in the same way as the top two are related.



- a) 1
- b) 2
- c) 3
- d) 4\*

22. A set of two pictures that are related to each other in the same way. Identify the missing image.



a)

b)

c)

d)\*

23. Find out which of the figures (1), (2), (3) and (4) can be formed from the pieces given in figure (X).



(X)



(1)

(2)

(3)

(4)

- a) 1  
 b) 2\*  
 c) 3  
 d) 4

24. Associate the image shown with the country



- a) Italy
- b) Japan\*
- c) Singapore
- d) Malaysia

25. India generates about 4.3 million tonnes of hazardous wastes every year. Direct exposure to two chemicals in hazardous waste can cause death. Name them.

- a) Mercury, Cyanide\*
- b) Arsenic, Sulphur
- c) Sulphur, Cyanide
- d) None of the above-mentioned

26. Which Indian mythological figure appears as a cattle-herder?

- a) Rama
- b) Bhima
- c) Krishna\*
- d) Eklavya

27. Ganjifa Cards are traditional playing cards of what shape?
- a) Rectangular
  - b) Circular\*
  - c) Diamond
  - d) Triangular
28. Kerala's giant fishing nets originally came from?
- a) Sri Lanka
  - b) Indonesia
  - c) China\*
  - d) Pakistan
29. Kalamkari is a form of:
- a) Dance
  - b) Painting\*
  - c) Film-making
  - d) Music
30. These words are inscribed below the base plate of the emblem of India
- a) Satyameva Jayate\*
  - b) Jai Hind
  - c) Work is Worship
  - d) Jana Gana Mana
31. Traditional way of Warli paintings are painted on
- a) Glass
  - b) Mud walls\*
  - c) Trees
  - d) Body

32. Which Indian classical dance do men traditionally perform?
- a) Kathakali\*
  - b) Kuchipudi
  - c) Bharatnatyam
  - d) Kathak
33. How many Rasas are there in Indian classical dance?
- a) 12 Rasas
  - b) 3 Rasas
  - c) 9 Rasas\*
  - d) Only One
34. Biodegradable waste includes organic waste, for example, kitchen waste, vegetables, fruits, flowers, leaves from the garden, and paper. Most of the biodegradable waste is household waste that is generated daily and amounts to a large percentage of all waste. Agricultural waste is also biodegradable in nature. Such waste is also known as organic waste and decomposes very fast, causing harm to the environment and health. The best way of disposal of this waste is through the method of \_\_\_\_\_.
- a) Industrial incinerated
  - b) Land filled
  - c) Burning
  - d) Composted\*
35. Astronomy is the study of \_\_\_\_\_.
- a) Palms
  - b) The Future
  - c) Stars\*
  - d) Oceans

36. This is an example of one of the first forms of writing. It came from Mesopotamia and was made by marks of a cut reed on clay. This form of writing is called \_\_\_\_\_.




- a) Hieroglyphics
  - b) Roman
  - c) Mesopotamian
  - d) Cuneiform\*
37. Which is the National Aquatic Animal of India?
- a) Hilsa
  - b) Dolphin\*
  - c) Turtle
  - d) Crocodile
38. Which of the following festivals have boat races as a special feature?
- a) Onam\*
  - b) Navratri
  - c) Pongal
  - d) Sankranti

39. Amrita Devi of the Bishnoi tribe started a movement against...

- a) Mining
- b) Deforestation\*
- c) Poaching
- d) Pollution

40. The following self-portrait is by the famous Mexican artist \_\_\_\_\_.



- a) Jamini Roy
- b) Diego Rivera
- c) Frida Kahlo\*
- d) Amrita Shergil

41. The popular "Pashmina Shawls" are made in \_\_\_\_\_.

- a) Rajasthan
- b) Kashmir\*
- c) Himachal Pradesh
- d) Madhya Pradesh

For Questions 117 and 118 Refer to the color image shown below.



42. The artist for the work above, called "The Starry Night" is \_\_\_\_\_.
- a) Jean- Baptiste Camille Corot
  - b) Picasso
  - c) Van Gogh\*
  - d) Claude Monet
43. The art movement to which the above image can be associated with is \_\_\_\_\_.
- a) Post-impressionist\*
  - b) Dadaism
  - c) Art Deco
  - d) Art Nouveau

44. Which kind of style will you associate the following furniture to \_\_\_\_\_.



- a) Bauhaus\*
- b) Art Nouveau
- c) Classical
- d) Post Modern

45. This is an image of St. Peter's Basilica in Rome, which is influenced by Renaissance Architecture. Which design qualities, peculiar to this era, will you associate with this image?



- a) Symmetry\*
- b) Hierarchy
- c) Contrast
- d) None of the above

46. Which style will you associate with the following artifacts?



- a) Modern\*
- b) Art Nouveau
- c) Classical
- d) De Stijl

47. Ikebana is Japanese art of \_\_\_\_\_.

- a) Paper Craft
- b) Dress Designing
- c) Miniature Tree Farming
- d) Flower Arrangement\*

48. The technique of mural painting executed upon freshly laid lime plaster is known as

- \_\_\_\_\_.
- a) Fresco\*
  - b) Gouache
  - c) Tempera
  - d) Cubism

49. Identify the art form.



- a) Gond
- b) Madhubani \*
- c) Pattachitra
- d) Warli

50. The following work represents an art movement known as \_\_\_\_\_.



- a) Minimalism
- b) Op Art
- c) Pop Art\*
- d) Digital Art

51. A clock strikes 4 taking 9 seconds. In order to strike 12 at the same rate, the time taken will be \_\_\_\_.
- a) 5 seconds
  - b) 12 seconds
  - c) 15 seconds
  - d) 33 seconds\*
52. A boat can travel with a speed of 22 km/hr in still water. If the speed of the stream is 5 km/hr, find the time taken by the boat to go 54 km downstream.
- a) 5 hours
  - b) 2 hours\*
  - c) 3 hours
  - d) 4 hours
53. A boatman can row 96 km downstream in 8 hours. If the speed of the current is 4 km/hr, in what time the boatman will be able to cover 8 km upstream?
- a) 6 hours
  - b) 5 hours
  - c) 4 hours
  - d) 2 hours\*
54. Find the 'odd number out' of this series of numbers: 24, 36, 52, 72, 96.
- a) 24
  - b) 52\*
  - c) 72
  - d) 96

55. Conversion of heat into electrical energy may be achieved by using
- a) Hydrometer
  - b) Voltmeter
  - c) Photoelectric tube
  - d) Thermocouple\*
56. A material is said to be transparent if ...
- a) it absorbs light and redistributes the energy as thermal energy.
  - b) light can pass freely through it in a straight line.\*
  - c) it reflects light.
  - d) it can vibrate at a resonant frequency to match the frequency of the light.
57. Which one of the following remains constant while throwing a ball upward?
- a) Displacement
  - b) Kinetic energy
  - c) Acceleration\*
  - d) Velocity
58. What is the meaning associated with image below?



- a) Recycle
- b) Reply\*
- c) Replay
- d) Reappear

59. This craft belongs to which state in India?



- a) Gujarat
- b) Karnataka
- c) Maharashtra\*
- d) Uttar Pradesh

60. What material is used to make the patterns on this box?



- a) White Gold
- b) Silver\*
- c) Aluminium
- d) Copper

61. How is the age of the wood calculated?

- a) Annual growth rings\*
- b) Height of the tree
- c) Width of the tree
- d) Colour of the bark

62. Identify the material of the bottle lid.



- a) Glass
- b) Cork\*
- c) Wood
- d) Metal

63. Which is not a defect in wood?

- a) Curling
- b) Bending
- c) Knot
- d) Grains\*

64. What is the major component in glass?

- a) Silica\*
- b) Quartz
- c) Iron oxide
- d) Feldspar

65. What material is used to make this craft?



- a) Terracotta
- b) Gourd\*
- c) Wood
- d) Bamboo

66. What are the five metals in *Panch Dhatu*?

- a) Gold, Silver, Copper, Iron, Brass
- b) Mercury, Silver, Copper, Iron, Brass
- c) Gold, Steel, Copper, Iron, Brass
- d) Gold, Silver, Copper, Iron, Lead\*

67. What does NFC stand for?

- a) Not Formal Communication
- b) Near Field Capacitor
- c) Nuclear Fuel Complex
- d) Near Field Communication\*

68. This crafts belongs to which state in India?



- a) Jammu & Kashmir \*
- b) Rajasthan
- c) West Bengal
- d) Gujarat

69. Identify the material.



- a) Wood
- b) Silicone\*
- c) Plastic
- d) Rubber

70. What is Spotify?

- a) A News channel
- b) A Mobile platform
- c) A music streaming service\*
- d) A music player

71. Which is a good conductor of heat and electricity among the following?
- a) Rubber
  - b) Mud
  - c) Plastic
  - d) Silver\*
72. What do AC and DC stand for in the Electrical Field?
- a) Alternating Capacitor and Direct Capacitor
  - b) Average Current and Direct Current
  - c) Alternating Current and Direct Current\*
  - d) A Rock Band
73. The concept of camouflage is also known as?
- a) Stealth Technology\*
  - b) Transparent Technology
  - c) Gesture technology
  - d) Infrared technology
74. What is Li-Fi?
- a) Wireless Communication through light\*
  - b) Light weight Wi-Fi
  - c) Infra red communication
  - d) Communication through Bluetooth
75. What does monochrome mean?
- a) Single layer
  - b) Dual layer
  - c) Single colour\*
  - d) Dual colour

## SID | Sample Paper 4

1. When all elements are in agreement, a design is considered.....

- a) Unified\*
- b) Loyal
- c) Sincere
- d) Identified

2. Which visual design principle is mainly reflected in the image below?



- a) Simplicity
- b) Proportion
- c) Rhythm
- d) Unity\*

3. What is the photographer trying to depict in the picture below?




- a) Beauty
- b) Vastness of sky
- c) Proportion\*
- d) Architecture

4. The view below is called as.....



- a) Eye level view
- b) Below eyelevel view
- c) Low view
- d) Bird view\*

5. The image below most aptly refers to.....



- a) Geometry
- b) Architecture
- c) Interior
- d) Perspective\*

6. Theories of Visual Perception developed by German psychologists in the 1920s refer to.....

- a) Gravitation
- b) Perfection
- c) Gestalt\*
- d) Motion

7. The viewer's eye will naturally follow a line or curve. Then it is.....

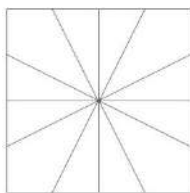
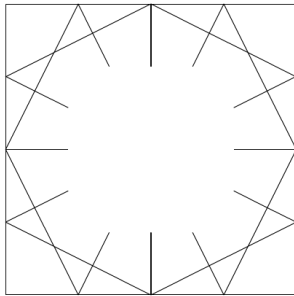
- a) Following
- b) Chain

- c) Flow
  - d) Continuation\*
8. Perspective is connected with the sense of .....
- a) Vision
  - b) Space
  - c) Elements
  - d) Distance\*
9. All Objects that have mass, take up.....
- a) Space\*
  - b) Visual
  - c) Dimension
  - d) None
10. .... is the lack of weight or substance.
- a) Mass
  - b) Void\*
  - c) Space
  - d) Illustration
11. What is Achromatic Harmony?
- a) Neutrals such as a combination of Black & White\*
  - b) Neutrals such as a combination of Red & Blue
  - c) Neutrals such as a combination of Orange & Yellow
  - d) Neutrals such as a combination of Purple & Green
12. Attention is drawn to the different elements in this composition because it breaks the pattern to .....

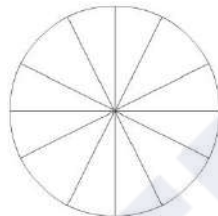


- a) Closure
- b) Similarity\*
- c) Group
- d) Continuation

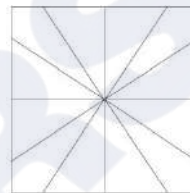
13. Select a suitable image from the four options given that will fit in the image below.



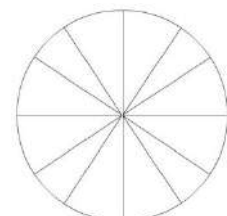
a)\*



b)



c)



d)

14. The object in the picture below, under the cloth (Towel) looks like a chair because .....



- a) Cloth is in the shape of chair
- b) There are always four chairs around the table
- c) There are three other chairs around\*
- d) It's not a chair

15. We can see one and half window in the picture. How many windows are there in real?




- a) Three\*
- b) One and half
- c) Two
- d) Four

16. Which of the following shapes are required to create the word 'Hello' as shown in the picture?




- a)
- b)\*
- c)
- d)

17. How many Bicycles are there in the picture below?




- a) 7\*
- b) 8
- c) 5
- d) 9

18. Identify the animal hidden in the image below.



- a) Dog
- b) Cat
- c) Zebra
- d) Horse\*

19. Find the mirror image of the line of dots given below.



a)

b)

c)

d)\*

20. How many elements are there in the picture below?




- a) One hand and One pot
- b) Two hands and one pot\*
- c) Two hands and two pots
- d) One hand and two pots

21. What does the 'g' in the image below stand for?



- a) Guitar
- b) Girl
- c) Giraffe\*
- d) Growth

22. Which is the suitable expression among the following for showing happiness?



- a) 2
- b) 1\*
- c) 3
- d) 4

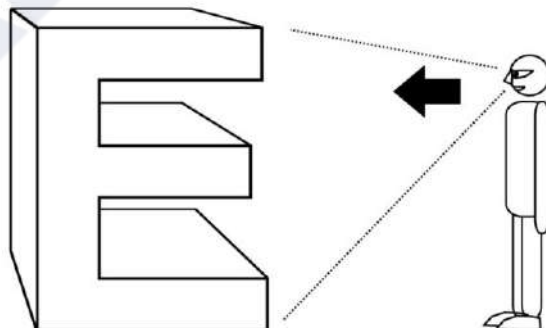
23. The three lion symbol used by Government of India is the inspiration from .....

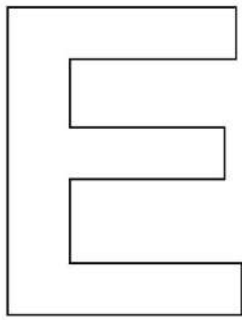
- a) Ajantha cave
- b) Sarnath\*
- c) Lion king movie
- d) Indus valley coins

24. Which is the vignette colour shade used on ICICI Bank display board.

- a) Deep orange to light orange\*
- b) Red to yellow
- c) Blue to pink
- d) Magenta to light magenta

25. When the letter "E" in 3D given below is viewed from the direction indicated, which is the appropriate image seen by the observer out of the four options given below?







a



b



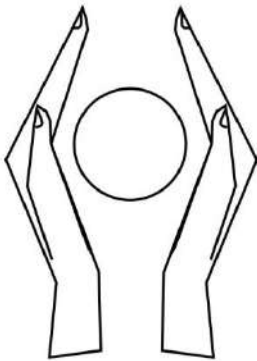
c



d

c\*

26. Select a suitable 'caption' for the below given image out of the options given.



- a) Save water
- b) Save power
- c) Donate blood
- d) Save earth\*

27. Select one suitable 'Type' (Font) for the title Aishwarya Jewellers out of the options given below.

a. *Abcdefghijklmn*

c. Abcdefghijklmn

b. **Abcdefghijklmn**

d. **Abcdefghijklmn**

a.\*

28. Which of the following is true for the form of chair shown here.



- a) Symmetrical
- b) Abstract\*
- c) Repetition
- d) Rugged

29. Arrangement of leaves in the coconut tree is .....



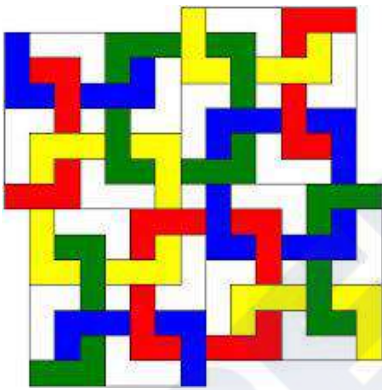
- a) Dynamic
- b) Radial\*
- c) Symmetrical
- d) Vertical

30. Which one of the following options is true for the given image?




- a) Bold
- b) Soft
- c) Rhythm\*
- d) Balance

31. How many complete square Polygons are there in the given image?




- a) 6
- b) 8
- c) 9\*
- d) 11

32. Which layer is in the front?



- a) Red
- b) Blue
- c) White
- d) Red, White\*

33. What is the nearest ratio of black (B) and light (L) in the image?



- a) 40 %(B), 60%(L)\*
- b) 10 %(B), 90%(L)
- c) 20 %(B), 80%(L)
- d) 30 %(B), 70%(L)

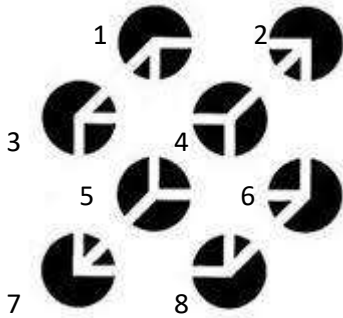
34. The Jali work in the image shown is an example of .....



- a) Rajput Architecture

- b) Mughal Architecture\*
- c) Roman Architecture
- d) Greek Architecture

35. Which four circles appears to be in the front?



- a) 1, 2, 3, 4
- b) 5, 6, 7, 8
- c) 3, 4, 7, 8\*
- d) 1, 3, 5, 7

36. How many spikes are the farthest from a viewer?








- a) 1\*
- b) 2
- c) 3
- d) 4

37. Which one of the following statements is false?



- a) Woman is wearing a necklace
  - b) Woman has black hair
  - c) Woman's ear is visible
  - d) Woman's neck is not visible\*
38. Random white dots put on a plane black surface is close to an interpretation of .....
- a) Positive
  - b) Negative
  - c) Pattern
  - d) Sky\*
39. Thin and thick lines vertically aligned forms a .....
- a) Square
  - b) Parallelogram
  - c) Barcode\*
  - d) Rectangle
40. An extended dot is a .....
- a) Shape
  - b) Texture
  - c) Form
  - d) Line\*
41. An outline of an element is called.....
- a) Boundary
  - b) Limit

- c) Contour\*
- d) Edge
42. An extrusion of a shape adds..... to its original form.
- a) Length
- b) Height
- c) Dimension\*
- d) Corners
43. .... has a tactile sensation.
- a) Canvas
- b) Space
- c) Texture\*
- d) Brown
44. Addition of white to a color makes..... of it.
- a) Tint\*
- b) Tone
- c) Pigment
- d) Shade
45. Which of the followings is the correct version of the logo of online site 'Pinterest'?
- a) 
- b)\* 
- c) 
- d) 
46. What does following symbol mean in the World Wide Web?



- a) Link
- b) Attachment
- c) Download
- d) Share\*

47. Which is the most famous comic book character created by Bob Kane?

- a) Superman
- b) Tarzan
- c) Batman\*
- d) Wolverine

48. The animated film 'The Lord of the Rings' (1978) was created by.....

- a) Ralph Bakshi\*
- b) Walt Disney
- c) Hanna Barbara
- d) Dreamworks Animation

49. Following in the image is.....



- a) Odometer
- b) Speedometer
- c) Tachometer\*
- d) Timer

50. Identify the logo:



- a) Good Homes
  - b) Nestle\*
  - c) Cadbury
  - d) Dr. Salim Ali Foundation
51. The Primary colours called as 'Primary' because.....
- a) Most of colours can be mixed by mixing these colours\*
  - b) These colours are comparatively cheap in price
  - c) They are available in the largest quantity in nature
  - d) All of the above
52. What is not a Hue from the followings.....
- a) Red
  - b) Purple
  - c) Mango\*
  - d) Green
53. Analogous colours are.....
- a) Three or more Hues which are positioned next to each other on the Color Wheel\*
  - b) Hues which lie opposite to each other on the colour wheel

- c) Hues that do not have any common colour
  - d) Hues which are grey
54. Which of the following is the property of Perspective.....
- a) Distortion\*
  - b) Warm Colours
  - c) Shade & Light
  - d) Shape
55. Gradation can be used to create.....
- a) Flat Colours
  - b) Dark Colours
  - c) Skin Colours
  - d) Depth\*
56. Distant mountains appear little bluer due to.....
- a) Earth Colour
  - b) Illusion
  - c) Atmospheric Perspective\*
  - d) Rivers
57. Highlight is created where the rays of light are.....
- a) parallel to the object's surface
  - b) too intense
  - c) golden
  - d) perpendicular to the object's surface\*
58. What is more accurate: Everything in this world is visible due to.....
- a) Light\*
  - b) Shade
  - c) Eyes
  - d) Sense

59. What is this medical pictogram depicting?



- a) Urology
- b) Neurology
- c) Respiratory\*
- d) Cardiology

60. What is this astronomical symbol depicting?



- a) Pluto
- b) Uranus
- c) Earth
- d) Jupiter\*

61. Which of the animals listed below is considered the universal representation of peace.

- a) Dove\*
- b) Cuckoo
- c) Peacock
- d) Hummingbird

62. Which of these might be an example of symbolism in a story?

- a) A girl eating ice cream
- b) A tree representing new life\*
- c) A box being opened at Christmas
- d) Trees whispering in the wind

63. Using an object to represent an idea, means.....

- a) Symbolism\*
- b) Metaphor
- c) Simile
- d) Allusion

64. The Conch is emblem of which Indian state?

- a) Karnataka
- b) Tamilnadu
- c) Orissa
- d) Kerala\*

65. Following image is a symbol for depicting.....



- a) Confusion\*
- b) Ideas
- c) Directions
- d) All of the above

66. Select the correct sequence of these  four Colors used for offset printing.


- a) BPYB
- b) CMYB
- c) CRYB
- d) CMYK\*

67. The following picture is the hood ornament of which luxury car brand?



- a) Range Rover
- b) Rolls Royce\*
- c) Bentley
- d) Austin

68. Following picture is the part of which sculpture?



- a) Priest king\*
- b) Priest queen
- c) Priest master
- d) None of the above

69. Which Indian musical instrument is this?



- a) Sitar\*
- b) Sarod
- c) Veena
- d) Sarangi

70. The following artist is a.....



- a) Puppeteer
- b) Mime artist\*
- c) Circus artist
- d) None of the above

71. What could the following mudra mean?



- a) Snake
- b) Butterfly
- c) Eagle\*
- d) Fish

72. This dress is traditionally worn by women of which country?



- a) Hungary\*
- b) Portugal
- c) Spain

d) Brazil

73. This distinct motif seen commonly in Indian textiles derives its name 'Paisley' from a small town found in which country?



- a) India
- b) Scotland, UK\*
- c) Persia
- d) Iran

74. This distinctive mud art known as 'Lippan' is practiced in which state of India?



- a) Rajasthan
- b) Haryana
- c) Uttar Pradesh
- d) Gujarat\*

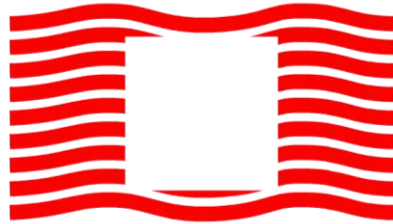
75. The Coromandel Coast in South-East India is home to which painted textile?



- a) Patachitra
- b) Kalamkari\*
- c) Gond painting
- d) Soara

Symbiosis Entrance Exam for Design (SEED)  
SAMPLE PAPER

1. Select a suitable figure from the following options that will fit in the picture below?



a)



b)




c)



d)

2. How many animals are there in the picture below?



a) 6

b) 4

c) 8

d) 7

3. Find the mirror image of the picture given below.



a)



b)



c)



d)

4. We have a glimpse of four sides of the roof. How many sides are there in real?




a) 4

b) 6

c) 7

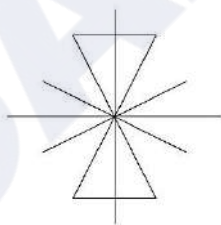
d) 8

5. How many triangles are there in the picture?

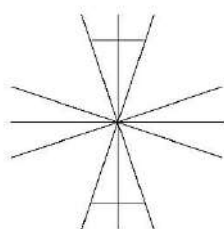


- a) 3
- b) 5
- c) 4
- d) 6

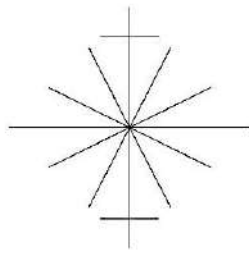
6. Select the suitable figure from the following options that will fit in the below given picture?



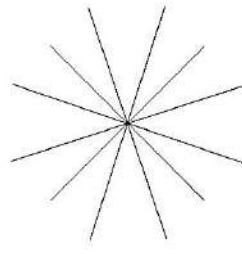
a)



b)



c)

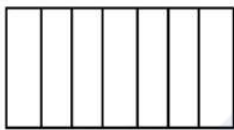


d)

7. What is the image seen if a person views the 3-Dimensional letter "W" from top view?



Letter "W" in 3 dimensional form.



a



b

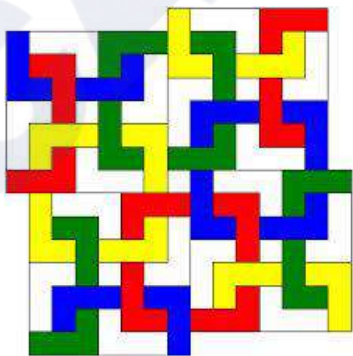


c



d

8. How many complete square Polygons are there in the given image?




- a) 6
- b) 8
- c) 9
- d) 11

9. Which of the following is completely true for the given traditional graphic image?



- a) Repetition
- b) Mirror image
- c) Symmetry
- d) Dynamic

10. Which layer is in the front?



- a) Red
- b) Blue
- c) White
- d) Red and White

11. Which of the following best suits the image of furniture?



- a) Rhythm
- b) Movement
- c) Asymmetry
- d) Smooth

12. What is this architectural element called?



- a) Skylight
- b) Roof window
- c) Roof glass
- d) Roof cutout

13. Which structure in India has this predominant element shown in the image?



- a) Forts in Rajasthan
- b) Temples in Orissa
- c) Temples in Tamil Nadu\*
- d) Temples in Punjab

14. Seen below is a section of a well-known logo below. Identify the logo.



- a) The X Files
- b) AXN
- c) Extreme Sports
- d) Express Courier

15. What is the next letter in this sequence J F M A M J \_\_?

- a) P
- b) S

- c) J
- d) T

16. The movie series Lord of The Rings is based on the works by \_\_\_\_\_.

- a) Homer
- b) Tolkien\*
- c) Plato
- d) Kalidas

17. The following fashion silhouettes are inspired from which crafting technique?



- a) Kirigami
- b) Origami
- c) Quilling
- d) None of the above

18. Identify this World Heritage Site.



- a) Angkor Wat
- b) Macho Pichu
- c) Campeche
- d) Cappadocia

19. This dance form belongs to which country?



- a) Malaysia
- b) Indonesia
- c) Korea
- d) Thailand

20. Here are some words translated from an artificial language.

*moolokarn* means blue sky,

*wilkospadi* means bicycle race,

*moolowilko* means blue bicycle.

Which word could mean "racecar"?

- a) Wilkozwet
- b) Spadiwilko
- c) Moolobreil
- d) Spadivolo

21. Fact 1: All dogs like to run.

Fact 2: Some dogs like to swim.

Fact 3: Some dogs look like their masters.

If the first three statements are facts, which of the following statements must also be a fact?

- I. All dogs who like to swim look like their masters.
- II. Dogs who like to swim also like to run.
- III. Dogs who like to run do not look like their masters.

- a) I only
- b) II only
- c) II and III only
- d) None of the statements is a known fact

22. A four-person crew from Classic Colors is painting Mr. Field's house. Michael is painting the front of the house. Ross is in the alley behind the house painting the back. Jed is painting the window frames on the north side, Shawn is on the south. If Michael switches places with Jed, and Jed then switches places with Shawn, where is Shawn?

- a) In the alley behind the house
- b) On the North side of the house
- c) In front of the house
- d) On the south side of the house

23. Look carefully for the pattern, and then choose which pair of numbers comes next.

28, 25, 5, 21, 18, 5, 14 \_\_, \_\_.

- a) 11, 5
- b) 10, 7
- c) 11, 8
- d) 5, 10

24. What material is used to make this craft?



- a) Terracotta
- b) Gourd
- c) Wood
- d) Bamboo


25. What does NFT stand for?
- a) Non Formal Testing
  - b) Near Field Terminal
  - c) Nuclear Fuel Technology
  - d) Non Fungible Tokens \*

**Note:** The actual question paper would have more questions from the similar topics.

CAREERS360

## SEED Sample Paper 7

1. Below given composition is made out of one number or letter from Roman script in repetition form. Identify the number or letter?



- a) S
- b) 5\*
- c) P
- d) 2

2. Below given pictograph contains some action. Identify the suitable title for the pictograph.



- a) CCTV Camera
  - b) Traffic
  - c) One posture of Yoga\*
  - d) None of the above
3. Below given net is created using some letterform, from roman script in various directions. Identify the letter and the quantity of the letter required to create this net?




- a) X - 12
  - b) W - 8\*
  - c) V - 21
  - d) M - 10
4. If 1 inch = 2.54 cm, then 1 foot (ft) = \_\_\_\_?
- a) 30.48 cm\*
  - b) 25.40 cm

- c) 258 cm  
d) 254 cm
5. The unit of measurement in typography to express the size of a font is \_\_\_\_.
- a) inch  
b) point\*  
c) cm  
d) type
6. Da Vincis 'Vitruvian Man' is \_\_\_\_.
- a) a sculpture in marble  
b) a cast bronze  
c) an oil painting on the walls of the Louvre  
d) an anatomical drawing that illustrates the human form in proportion\*
7. If (m) is for length, then (A) is for \_\_\_\_.
- a) amount of matter  
b) electric current\*  
c) luminous intensity  
d) altitude
8. Put the answer in the correct order.  
If you had to design a chair for a disabled person, you would \_\_\_\_
- 1) Start ideating and sketching out concepts
  - 2) Research what is currently available in the market
  - 3) Research about the type of disability you would be designing for
  - 4) Construct the final chair after incorporating the changes
  - 5) Construct rough prototypes to test the suitability of the design
  - 6) Redesign according to the feedback
  - 7) Retest after feedback with the improved design
- a) 1, 3, 5, 7, 6, 4, 2

- b) 3, 2, 1, 5, 6, 7, 4\*
- c) 2, 3, 1, 4, 6, 7, 5
- d) 5, 1, 2, 3, 6, 7, 4

9. All the shapes are different, yet they are connected because of \_\_\_\_\_.




- a) Proximity\*
- b) Repetition
- c) Similarity
- d) All of the above

10. This set of images primarily shows



- a) Scale\*
- b) Shape
- c) Position
- d) Emphasis

11. Which is the missing area from the image provided



a)\*



b)




c)




d)

12. Which is the next in sequence?



a)\*



b)



c)




d)

13. How many fonts (type styles) have been used in the image below?



- a) 4
- b) 5\*
- c) 6
- d) 7

14. Which of the following shapes can be formed from this sheet?




a)



b)\*



c)



d)

15. 3D drawing is derived by keeping focus on

- a) Depth and Space\*
- b) Drawing and Perspective

- c) Image and Balance
- d) Balance and Symmetry

16. Select the any three out of the five alternative figures which when fitted into each other would form a complete square.



(1)



(2)



(3)




(4)



(5)

- a) 1-2-4
- b) 2-3-4
- c) 1-2-5\*
- d) 2-4-5

17. The hidden word in the visual given below is \_\_\_\_\_.



- a) Race
- b) Texture
- c) Burger\*
- d) Bread

18. Identify a figure/Object used in the picture below?



a)

b)

c)\*

d)

19. Identify the Object made out of the pieces in the picture below?



20. If White House is made of White tiles, Green House is made of \_\_\_\_\_.

- a) White tiles
- b) Blue and Yellow tiles
- c) Glass Sheets\*
- d) Green Tiles

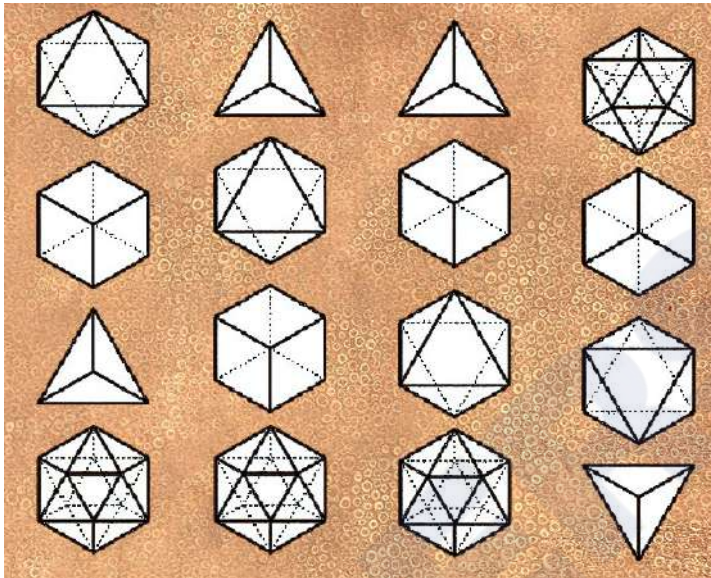
21. Road dividers are painted Yellow and Dark Grey because \_\_\_\_\_.

- a) They look really good
- b) A lot of people prefer yellow over red
- c) Red is for danger
- d) They provide a very dynamic contrast\*

22. Most important element of designing the signage of Danger zones is \_\_\_\_\_.


- a) Red Color\*
- b) "!" Mark
- c) Triangle
- d) Placement

23. Which one is the accurate visual sequence of the shapes given below?



- a)
- b)
- c)\*
- d)

24. Identify a figure/Object used in the picture below?



a)



b)\*

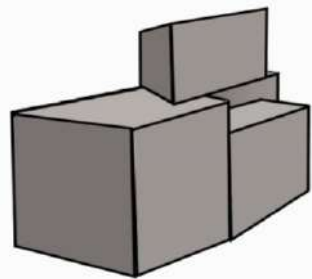
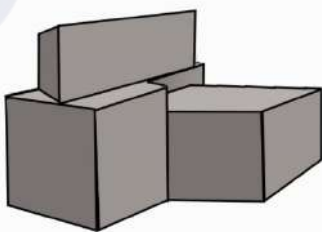


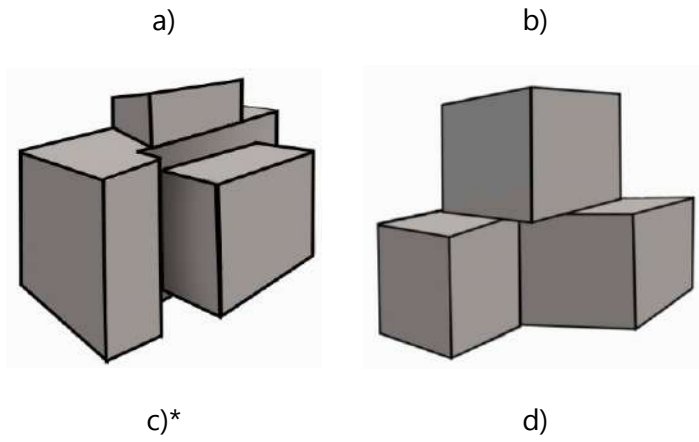
c)




d)

25. Which basic geometrical structure is suitable for the object in the picture below?





26. How many shapes do you see in the image given below?



- a) 3
- b) 4
- c) 5\*
- d) 6


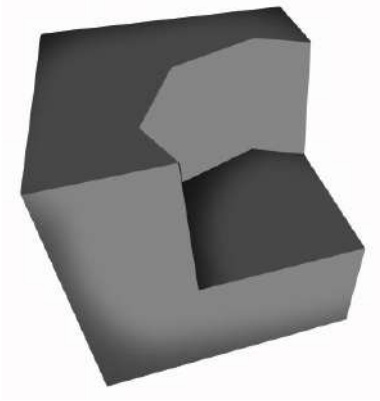
27. Identify the Five alphabets hidden in the picture below.




- a) E W O A V
- b) F V C A X\*
- c) P W O A E

d) B V A O X

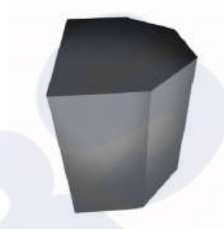
28. Identify a shape, which can fit into the scooped out area of the block in this picture.



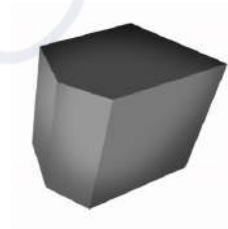
a)



b)\*





c)




d)


29. From the given options, which colour will create a less disparity by placing it in the empty space of the frame below?




a)



b)

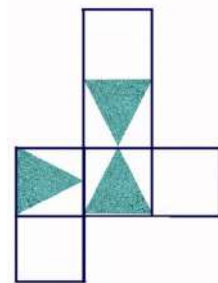






c)\*



d)

30. Which one is the correct unfolded diagram of the object given below?



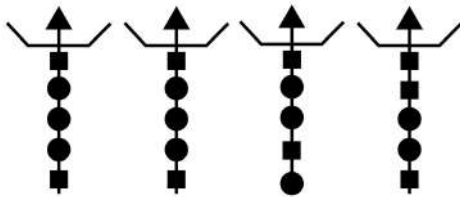
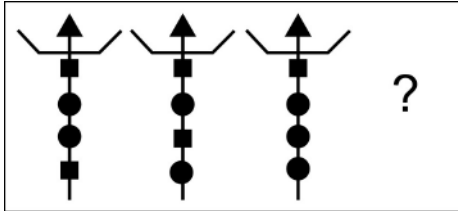
a)

b)\*

c)

d)

31. Select the correct alternative, which would replace (?) sign in order to complete the sequence?




a)

b)\*

c)

d)

32. The paper A is a transparent sheet and folded on the line, choose the pattern, which will appear when folded?



A

a)

b)

c)\*

d)

33. How many numbers of circles are achieved if we cut a sphere at its center in horizontal axis?

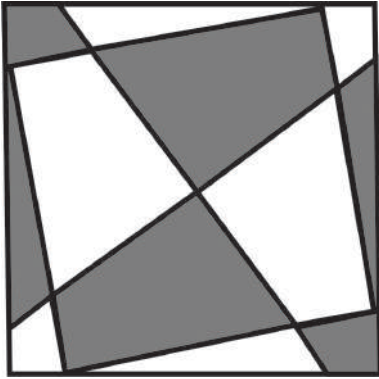
a) 4

b) 2\*

- c) 3
- d) 1

CAREERS360

34. How many quadrilaterals do you see in the given image?



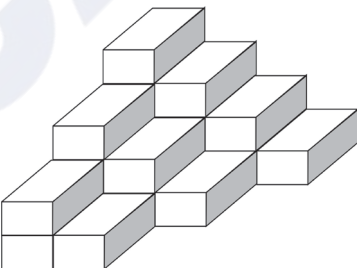
- a) 32
- b) 30\*
- c) 26
- d) 28

35. How many triangles are given in the image below?



- a) 12
- b) 13
- c) 15\*
- d) 14

36. How many bricks are there in given image?



- a) 10
- b) 12



a)

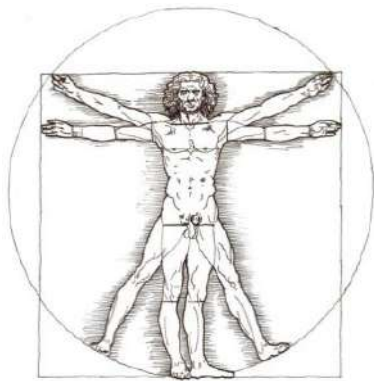
b)

c)

d)\*

CAREERS360

39. Which four animals are there on the emblem of India in between four Ashok chakras?
- a) Elephant, Cow, Rhinoceros, Deer
  - b) Horse, Panther, Bull, Dear
  - c) Lion, Elephant, Horse, Bull \*
  - d) Tiger, Elephant, Cow and calf, Horse
40. Name the person who has designed the given image, which established the standard human body proportions?



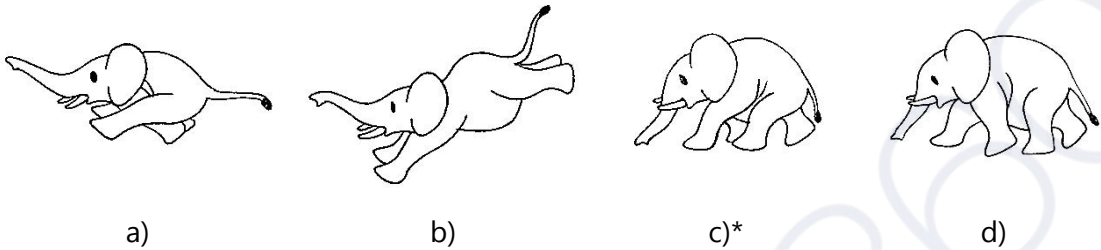
- a) Raja Ravi Varma
  - b) Michelangelo Buonarotti
  - c) Leonardo Da Vinci's \*
  - d) Rembrandt van Rijn
41. The given hand gesture in image below represents which painting?



- a) Youth in lotus pond, ceiling fresco at Sittanvasal

- b) Meditating Buddha from the Gupta era
- c) Mural of Padmapani in Ajanta Caves\*
- d) Abu'l-Fazl presenting Akbarnama to Akbar

42. Which is the correct figure of an elephant in motion?




43. Direction of rotation of the fan is indicated in the figure below. In which direction will air flow?



- a) Upward\*
- b) Downward
- c) All around
- d) Sideways

44. Observe the arrangement of the shapes and identify the next step of the sequence from the given options.



a)

b)\*

c)

d)

45. Which of these is the bronze sculpture from the ancient Indus valley civilization?

- a) Bearded Priest
- b) Dancing Girl\*
- c) Male Torso
- d) Mother Goddess

46. Stars in the sky that appears red are \_\_\_\_\_ than stars that appearing blue.

- a) Colder\*
- b) Hotter
- c) Brighter
- d) Dimmer

47. The wavelengths of light produce \_\_\_\_\_.

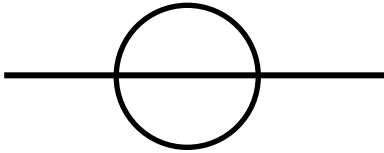
- a) Sound
- b) Distortion
- c) Color\*
- d) Illusion

48. Find the mismatch between festival and state.

- a) Rajasthan - Gangaur

- b) Maharashtra - Ganesh Chaturthi
- c) Uttar Pradesh - Krishna Janmashtami
- d) Gujarat - Durga Puja\*

49. What does this Symbol stand for on a DSLR camera body?



- a) Image plane\*
- b) Image axis
- c) Focal Axis
- d) Focal point

50. What does these Symbols stand for?



- a) Rewind Eject Pause Stop Play Fast Forward\*
- b) Rewind Pause Eject Play Stop Fast Forward
- c) Rewind Play Pause Stop Eject Fast Forward
- d) Rewind Eject Play Stop Pause Fast Forward

51. What does following signs signify?



- a) Frequency high sound low sound
- b) Positive Negative Earthing\*
- c) Plus Minus Parallel
- d) Positive negative Increment

52. What does the dashed line on the centre of the road mean?



- a) Over take here\*
  - b) Cannot overtake here
  - c) Crossing area
  - d) Road divider
53. Which colour do we get when we mix RGB in light theory?
- a) White \*
  - b) Off-white
  - c) Grey
  - d) Black
54. Which number represents High Definition Picture quality?
- a) 1080 p\*
  - b) 1088 P
  - c) 1070 P
  - d) 1090 P
55. Arrange the following sequence of android versions:
- 'Éclair' 'Cupcake' 'Donut' 'Froyo' 'Gingerbread' 'Honeycomb'
- a) Cupcake Donut Éclair Froyo Gingerbread Honeycomb\*
  - b) Honeycomb Gingerbread Froyo Éclair Donut Cupcake

- c) Cupcake Donut Éclair Honeycomb Gingerbread Froyo  
d) Donut Éclair Cupcake Gingerbread Froyo Honeycomb
56. How many times number '500' is mentioned on a new 500 note?  
a) 30  
b) 29  
c) 28\*  
d) 27
57. How many claws do the character 'Wolverine' has on both the hands?  
a) 6\*  
b) 8  
c) 10  
d) 4
58. What is the object used in PIXAR identity?  
a) Table Lamp\*  
b) Boy on the Moon  
c) Ice Mountain  
d) Castle
59. How many legs does an ant have?  
a) 4  
b) 6\*  
c) 8  
d) 10
60. Pair the following animals according to their similar walking pattern.  
1. Bison 2. Buffalo 3. Horse 4. Deer 5. Rhinoceros 6. Hippopotamus
- a) 1&2, 5&6, 3&4\*  
b) 1&2, 6&3, 5&4

- c) 5&6, 2&3, 1&4
- d) 3&4, 5&1, 2&6

CAREERS360

## SEED Sample Paper 7

1. Find the mirror image of the image given below.



a)



b)



c)

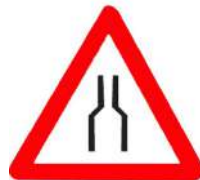


d)\*

2. Sam sent a message to his girlfriend, and asked her to meet under \_\_\_\_\_.



a)



b)




c)\*



d)


3. In the image, a sphere kept on a surface, is lit by a source of light that is bigger than the sphere and close to the sphere. Identify and mark the correct shadow of the sphere.




a)



b)\*




c)



d)

4. Which one of these containers will hold most water?



- a) A  
b) B  
c) C\*  
d) D

5. The image given is used in an opening sequence of a movie. In the sequence a logo is being formed. Identify the company the logo belongs to?




- a) EA Games
- b) D C Comics
- c) Marvel Comics\*
- d) Virgin Comics

6. Which would be an inappropriate logo for a vegan company?



a)\*



b)



c)



d)

7. There was a robbery at night at a nearby bank. The eyewitness saw a green car under the yellow light. Which of the following cars do you think was used in the robbery?



a)



b)



c)\*



d)

8. There was a legendary smuggler who used to put his goods on a donkey and take them across the border check post every day. When he came back carrying the unsold goods himself, he was searched again. Despite repeated searches over several days the guards never found anything to arrest him. What is it that he was smuggling?

- a) Bone China
- b) Gold
- c) Currency

d) Donkeys \*


9. Essay writing contest was held at a reputed university. The teacher suspected one of the students to have written the essay at home instead of in the class. Which of the following students has copied?



a)



b)\*

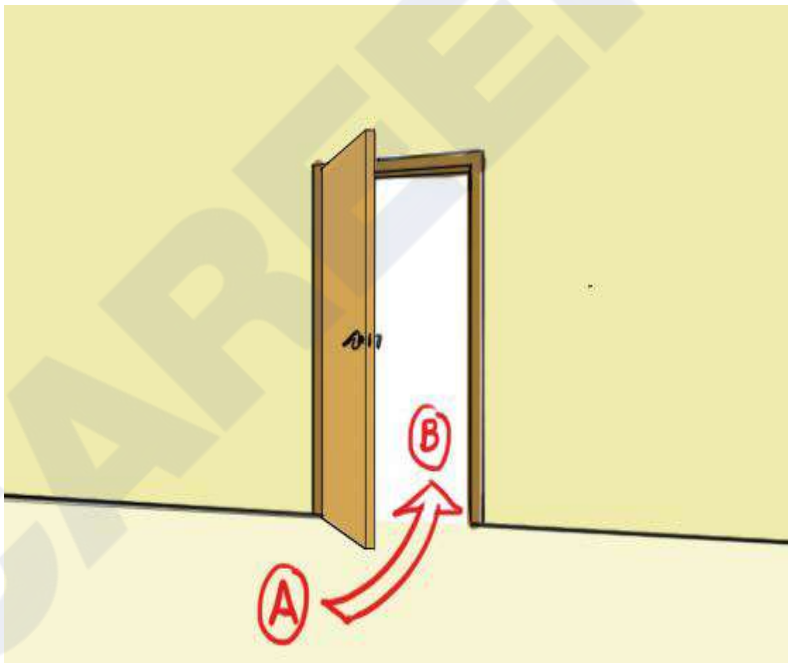


c)



d)

10. If one need to go from point A to point B which of the following keys would you need to open the said door.



a)

b)

c) a & b

d) None\*

CAREERS360

11. Rearrange the coins so that the 10 paise coins are together and the 2 rupees coins are together with no empty space in between each coin. At the end of each move, the coins are always in a line as in the original configuration. Each move consists of moving two adjacent coins at one time. So you start from an arrangement in image A and end as an arrangement in image B. How many moves are needed?


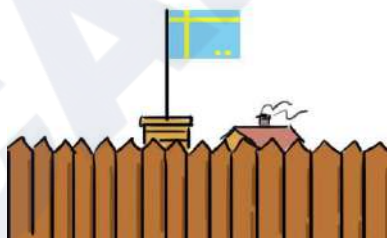


- a) 3\*
- b) 2
- c) 5
- d) 1

12. You are a soldier of a country and you are returning to your military outpost. The flag of your country looks like this.




In which of the following situations would you consider your outpost under distress.

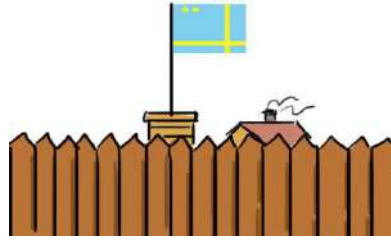


a)

b)



c)



d)\*

13. Rahul needs a pair of scissors. Which of the following should he buy for himself?



a)\*



b)



c)



d)

14. A man sent his son to buy 3 kg of any fruit. When the son came back the man was very angry with he had bought but could not scold him as the son was technically correct and had purchased fruits only. Which of the following had he purchased?

- a) Beet Root
- b) Cabbage
- c) Tomato\*
- d) Broccoli

15. Find the odd one out.

ONE TWO **THREE** FOUR

- a) ONE
- b) TWO
- c) **THREE**\*
- d) FOUR

CAREERS360

16. The following is a road sign for a hotel.



How would the signage on the opposite side of the road sign look like so that it points in the direction of the hotel?



a)

b)\*




c)

d) None of these

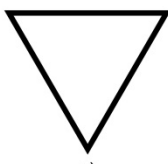
17. Which shape would you say exhibits a stable nature?



a)



b)



c)




d)

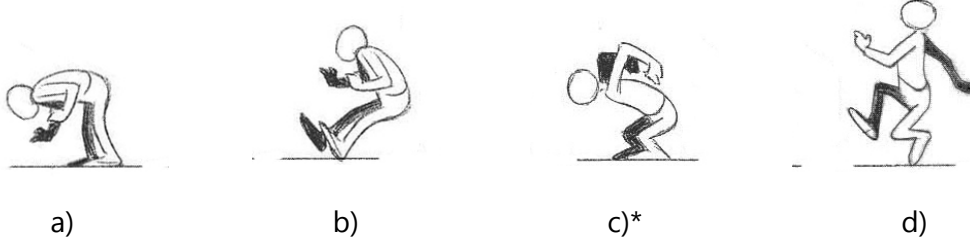
Ans: d)\*

18. Rahul's mom had told him to go out and play with his friends in the evening and not stay at home playing games on the console. When she came home later at night, Rahul told her that he was out playing football with friends and had just returned. Mom suspected that he is lying and played console games the whole evening. Why?

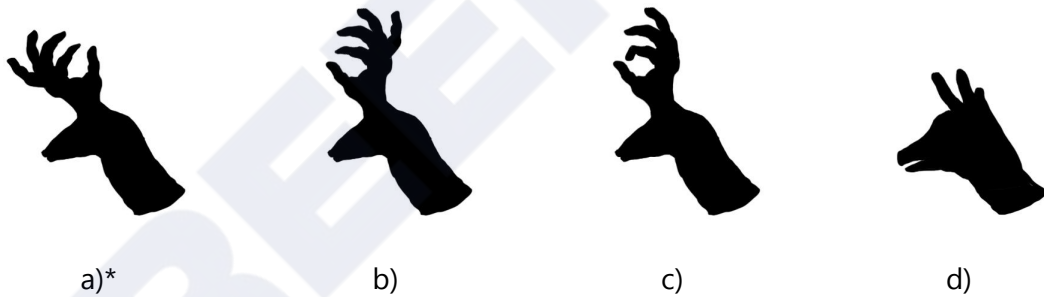


- a) He is not wearing his shoes.  
b) The football is not dirty  
c) The cat is sleeping on the console  
d) All of the above \*
19. Choose the correct gesture from the following options for Question mark space to complete the jump cycle.





20. The puppet artist is using his hands to cast shadows onto the walls to show various animals. Which animal shape do you think that such an arrangement of hands would project?



21. Match the right tools for the operating/opening the right objects.



- a) a) iv, b) i, c) iii, d) ii
- b) a) ii, b) iii, c) i, d) iv
- c) a) iii, b) iv, c) ii, d) i \*
- d) a) i, b) ii, c) iv, d) iii

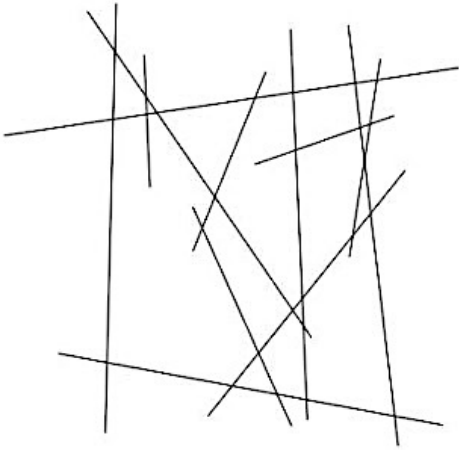
22. All body parts of a bird are designed with a specific purpose. If the purpose is different for different organisms the body parts exhibit variation to serve the specific need. The image below has the images of bird's feet v/s a list for the purpose they are best suited for. Match the same.



- a) a) iii, b) iv, c) i, d) ii
- b) a) ii, b) iii, c) iv, d) i \*


- c) a) i, b) ii, c) iii, d) iv
- d) a) iv, b) i, c) ii, d) iii

23. Count the number of lines in the image below.



- a) 14
- b) 6
- c) 9
- d) 12\*

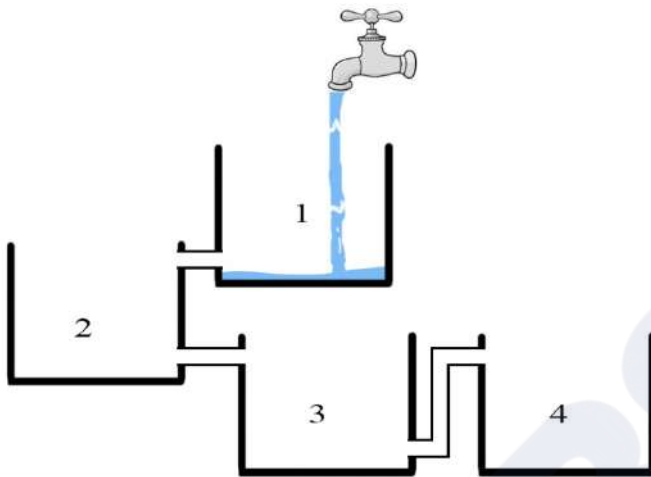
24. How many pencils are there in the image below.



- a) 10
- b) 8\*

- c) 5
- d) 6

25. Assuming air pressure is equal on all tanks and flow rate of water pouring into 1 through tap is the equal to the water going through the openings, which tank would fill up first?



- a) Tank 1
- b) Tank 2 and 3
- c) Tank 3 and 4 \*
- d) Tank 1 and 4

26. Count the number of stars in the image below.



- a. 16
- b. 25 \*
- c. 27
- d. 22

27. Which of the following would not be considered a physical work characteristic?

- a) A drill
- b) A 100-kg supervision officer \*
- c) A sack of potatoes in a produce warehouse
- d) A workplace temperature of 30 degrees Celsius

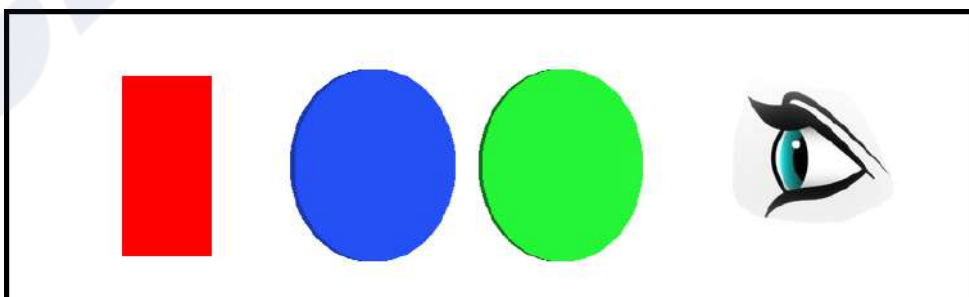
28. Some objects look white in color like snow, because they \_\_\_\_\_

- a) reflect all the colors \*
- b) absorb all the colors
- c) refract all the colors
- d) absorb white color only

29. Which of these words do you think connect to both SUBMARINE and CAMERA?

- a) Depth of Field
- b) Lens\*
- c) Battery
- d) Shutter

30. Red color object was seen through a green and blue lens. What color does the eye see?



- a) Magenta

- b) Purple
- c) White \*
- d) Orange

31. What is the text written in the image below?



- a) FREAK JOKST TOWER
- b) BREAD JOIST POWER
- c) SREAD IOJST POVVER
- d) FREAD JOKST TOWER \*

32. Fact 1: Sushma has four children

Fact 2: Two of the children have hazel eyes and two of the children have black eyes.

Fact 3: Half of the children are girls.

If the first three statements are facts, which of the following statements must also be a fact?

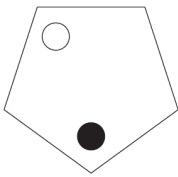
I: At least one girl has hazel eyes.

II: Two of the children are boys.

III: The boys have black eyes.

- a) I only
- b) II only\*
- c) II and III only
- d) None of the statements is a known fact

33. The white dot moves two places anti-clockwise at each stage and the black dot moves one place clockwise at each stage. After how many stages will they be together in the same corner?



- a) 2
- b) 4 \*
- c) 3
- d) 5

34. Which group of letters is the odd one out?

CEFH

LNOQ

UWXZ

HJKN

PRSU

DFGI

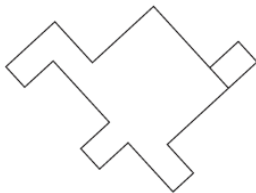
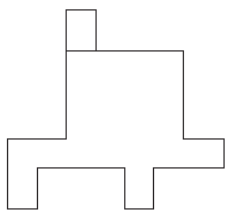
a) UWXZ

b) HJKN \*

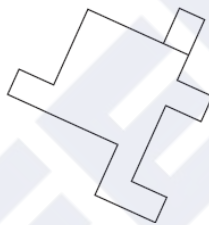
c) CEFH

d) DFGI

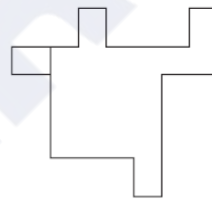
35. Which shape below is identical to the shape Below?



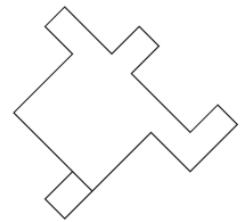
a)



b)



c)



d)\*

36. Which letter from the sequence below is three to the right of the letter immediately to the left of the letter which is four to the left of the letter G?

A

B

C

D

E

F

G

H

a) B

b) C

c) E \*

d) G

37. A is B's sister. C is B's mother. D is C's father. E is D's mother. Then, how is A related to D?

- a) Grandfather
- b) Grandmother
- c) Daughter
- d) Granddaughter\*

38. What comes next?



a)



b)

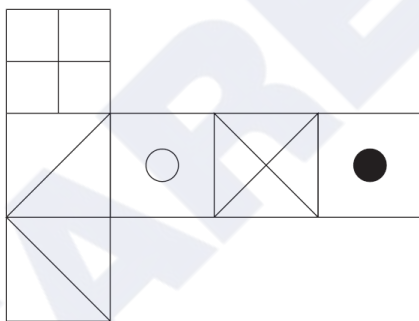


c)\*

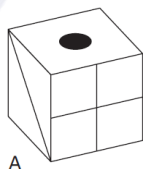


d)

39. When the image below is folded to form a cube, which is the only one of the following

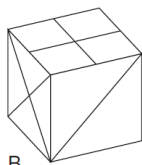


that can be produced?



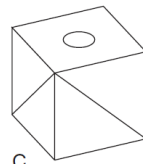
A

a)\*



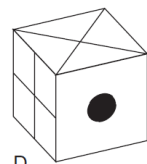
B

b)



C

c)



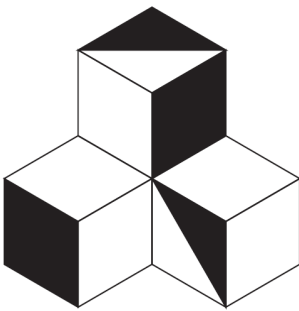
D

d)

40. How many pairs of letters in the word 'CHAIRS' have as many letters between them in the word as in the alphabet?

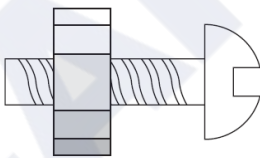
- a) 2\*
- b) 3
- c) 1
- d) 4

41. What percentage of the visible figure is shaded?



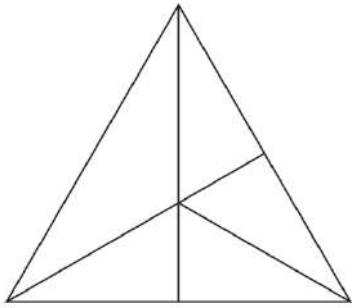
- a) 50%
- b) 33.33% \*
- c) 66.66%
- d) 40%

42. A nut is so tight on a screwed bolt you are having great difficulty unscrewing it. Which of the following is the most effective in freeing it?



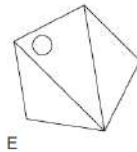
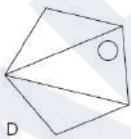
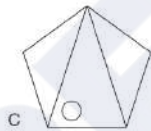
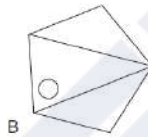
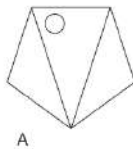
- a) Cooling it
- b) Submerging it in warm water
- c) Heating it \*
- d) None of the above

43. How many triangles appear in the shape below?



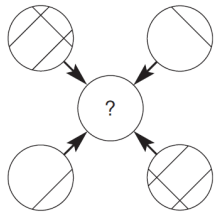
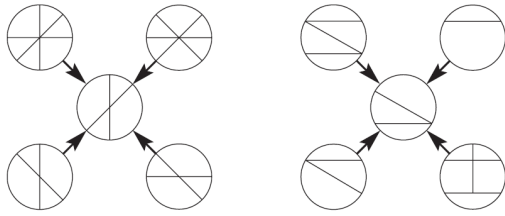
- a) 6
- b) 5
- c) 12 \*
- d) 10

44. Which one is the odd one out?



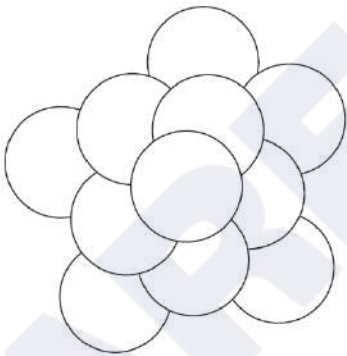
- a) B
- b) E
- c) C \*
- d) A

45. Which circle should replace the question mark?



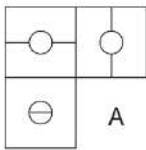
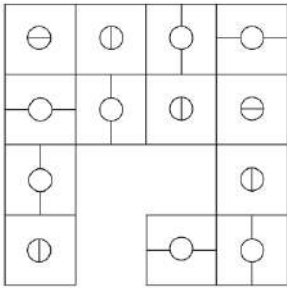
- a)            b)\*            c)            d)

46. How many circles appear above?

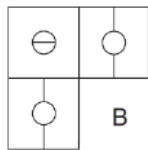


- a) 9  
 b) 3  
 c) 1\*  
 d) 11

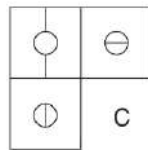
47. Which is the missing section?



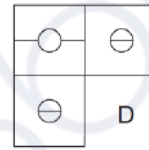
a)



b)



c)



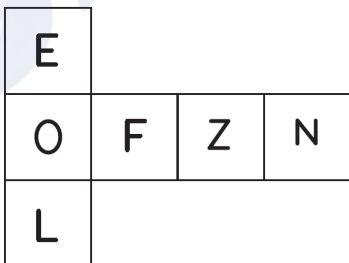
d)\*

48. How many 4's are there preceded by 7 but not followed by 3?

5 9 3 2 1 7 4 2 6 9 7 4 6 1 3 2 8 7 4 1 3 8 3 2 5 6 7 4 3 9 5 8 2 0 1 8 7  
4 6 3.

- a) Four\*
- b) Three
- c) Six
- d) Five

49. When the developed surface below is folded along the edges to form a cube, just one of the following can be produced. Which one?





a)\*



b)



c)



d)

50. In a certain code language, '134' means 'good and tasty'; '478' means 'see good pictures' and '729' means 'pictures are faint'. Which of the following digits stands for 'see'?

- a) 9
- b) 2
- c) 1
- d) 8\*

51. Ayush was born two years after his father's marriage. His mother is five years younger than his father but 20 years older than Ayush who is 10 years old. At what age did the father get married?

- a) 23 years\*
- b) 25 years
- c) 33 years
- d) 35 years

52. Today is Monday. After 61 days, it will be:

- a) Tuesday
- b) Monday
- c) Sunday
- d) Saturday\*

53. Your image in a bathroom mirror results from \_\_\_\_\_.

- a) Diffuse reflection
- b) Specular refraction\*
- c) Specular reflection
- d) Diffuse refraction

54. Name the state of matter that have the tendency to maintain their shape when subjected to outside force?

- a) Liquid
- b) Solid\*
- c) Vapour
- d) Gases

55. Sushil parked his bicycle on a sunny day in a parking stand of his school campus. When the school got over Sushil saw his burst bicycle tyre. Why did tyre burst?

- a) Tyre was punctured
- b) Someone did it purposely
- c) Air inside the tyre got heated and exerted pressure on wall\*
- d) Tyre was of inferior quality

56. Identify the country of origin of this dish.



- a) Thailand
- b) Vietnam\*
- c) Malaysia
- d) Japan

57. What is this famous artwork painted by S. H. Raza called?



- a) Surya-namaskar
- b) Bindu
- c) Horizon
- d) Bharat Bhoomi\*

58. Which one of the following has been judged as India's top most brand in 2016?

- a) Bharti Airtel\*
- b) HDFC Bank
- c) State Bank of India
- d) Asian Paints

59. Which rule of composition has been used in the below picture?



- a) Rule of thirds
- b) Golden proportion
- c) Rabatment\*
- d) Golden sections

60. "Viewing a good image begets good luck" is the inherent belief behind this art form.  
Identify it.



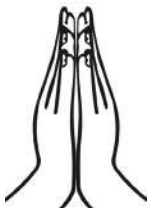
- a) Patachitra
- b) Gond\*
- c) Bhil
- d) Bheent Chitra

# SEED Sample Paper 1

1. Which is the most appropriate description for the font used in the word 'Time'?

- a) Straight font
- b) Left aligned font
- c) Serif font\*
- d) Bold font

2. The image shown is a common gesture, Namaste, in Indian culture. The meaning of the same could be closely translated as:



- a) Hello
- b) I bow to you\*
- c) I will meet you soon
- d) Good morning

3. The pattern shown in the picture can be characterized as:



- a) Trichloroethenal
- b) Greek
- c) Mughal\*
- d) Byzantine

4. Which pictures are not Indian road signs?



1

2

3

4

- a) 1 and 4\*
- b) 2 and 4
- c) 1 and 4
- d) 2 and 3

5. Chinese language is based on

- a) Alphabet
- b) language units
- c) letters
- d) pictograms\*

6. Which among these are not associated with media?

- a) BBC
- b) BMG
- c) EST\*
- d) WGN

7. Which of this fiction character has the weakness 'kryptonite'?

- a) Tintin
- b) Asterix
- c) Spider-Man
- d) Superman\*

8. The process of transferring etched image to a paper:

- a) Lithography\*
- b) Cartography
- c) Woodcut printing
- d) Calligraphy

9. Which among these is not a font family?
- a) Helvetica
  - b) Garamond
  - c) Mutta Bliza\*
  - d) Calibri
10. What is JPEG?
- a) Joint Photography Expertise Group
  - b) Joint Photographers Experts Group
  - c) Joint Photographic Experts Group\*
  - d) Junior Photographic Expert Group
11. In inkjet printer \_\_\_\_\_
- a) image is formed by means of minute jets of Ink\*
  - b) image is formed by means of a laser activated Jet
  - c) image is formed by means of toner color attracted on to a cylinder and ink is transferred on to paper
  - d) none of the above
12. Who is not a musician of Indian origin?
- a) Freddie Mercury
  - b) Louis Banks\*
  - c) Usha Uthup
  - d) Garry Lawyer
13. Which is not an Indian performing art?
- a) Kabuki\*
  - b) Mohiniyattam
  - c) Odissi
  - d) Yakshaganam
14. What is beat in music?
- a) Rock music
  - b) Dance music
  - c) Rhythm of Music\*
  - d) Strong and weak accent

15. Authors of the book 'Nanovation' are \_\_\_\_\_
- a) Sam K & Jack J
  - b) Lewis K & David D
  - c) Kevin & Jackie Freiberg and Dain D\*
  - d) Jackie Collins
16. Which of the type of wood is not used in making furniture?
- a) Cinchona\*
  - b) Teak
  - c) Rosewood
  - d) Shisham
17. What among these is not the use of Bamboo?
- a) Boat\*
  - b) Furniture
  - c) Utensil
  - d) Paper
18. What is not the product from coconut tree:
- a) Coir mat
  - b) Mattress
  - c) Gum\*
  - d) Furniture
19. What is not the problem of Indian agriculture?
- a) Inadequacy of finance
  - b) Indian farmers are superstitious
  - c) Indian farmers don't have means to improve economic condition
  - d) Indian farmers are not using water properly\*
20. Name the company which was founded in 1865 into manufacturing paper, switched to rubber products, cables, gas masks, and chemicals till 1980s when they got into something revolutionary:
- a) Apple
  - b) Nokia\*
  - c) Samsung
  - d) Blackberry

21. Universal Design is not \_\_\_\_\_
- a) of high aesthetic value
  - b) for specific markets
  - c) to benefit more people
  - d) to design a new world\*
22. Pick the word which is not associated with photography
- a) Prototroph\*
  - b) Sensor
  - c) Depth
  - d) Filter
23. What is not a major sector in fashion industry?
- a) Raw material manufacturing
  - b) Production of fashion products
  - c) Dying\*
  - d) Fashion Retail sector
24. Which one of these is non-existing?
- a) Vertical farming
  - b) Aero fishing\*
  - c) Solar home
  - d) Soil lamp
25. Which of these would not help Car/auto rikshaw sharing system for transportation?
- a) Signage
  - b) Software
  - c) Parking facility
  - d) Petrol to diesel shift\*
26. Who is not a painter?
- a) Degas
  - b) Michelangelo
  - c) Picasso
  - d) Stravinsky\*

27. Pick a hybrid petrol-electric car.

- a) Honda Brio
- b) Toyota Prius\*
- c) Hyundai Dorian
- d) Ford Cryo

28. Which one could be called the foot soldiers of digital revolution among cellphones and digital camera?

- a) Plastic body
- b) Keypad
- c) Touch screen
- d) Lithium-ion battery\*

29. Identify the object.



- a) Toaster
- b) Fiat car grill
- c) Speakers
- d) BMW car grill\*

30. Identify the object.



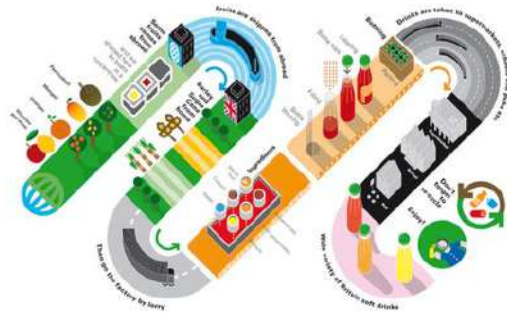
- a) Taj Mahal\*
- b) Charminar
- c) Gateway of India
- d) Red fort

31. Identify the sculpture.



- a) Krishna
  - b) Hanuman
  - c) Nataraja\*
  - d) Bernini
32. In a room, if there are 10 people and all of them shake hands with each other, how many handshakes will be there?
- a) 25
  - b) 100
  - c) 45\*
  - d) 30
33. How would you expand DSLR?
- a) Dial Sleek Lens Revolution
  - b) Digital Silverhalide Reflex
  - c) Digital Single Lens Reflex\*
  - d) Dichoto Silver Layered Reflex
34. Which one is a product design?
- a) Pressing iron
  - b) Computer mouse
  - c) Pressure cooker
  - d) All of the above\*

35. How would you describe the picture?



- a) Image of a Train
- b) Flow of a Process\*
- c) A picture of a worm
- d) Reverse action

36. Identify the object.



- a) Art Installation
- b) Mosquito net
- c) Japanese coastal artifact
- d) Chinese fishing net\*

37. Describe the image below.



- a) It's a mix of fresh water marine fish
- b) The display is grouped by size and type\*
- c) All fish is on the table
- d) None of the above is correct

38. Describe the image:



- a) Picture panel
- b) Information panel\*
- c) Flex board
- d) Colored board

39. Comment on the vessels:



- a) Not designed to carry one top of another, still it is used
- b) It looks like an object designed to play as well as carry water
- c) Smaller neck to hold and bigger body to contain water \*
- d) It is a damaged vessel

40. Film is projection of \_\_\_\_\_

- a) 25 frames per second\*
- b) 24 frames per minute
- c) 25 frames per minute
- d) 20 frames per second

41. What is a scripture?
- a) Ancient books
  - b) Egyptian books
  - c) Sacred religious book or writings\*
  - d) Jewish letters
42. What is focal length of a lens?
- a) Distance between the outer edge and the inner edge of the lens
  - b) Distance between the center of lens and the focus\*
  - c) Distance between an object and the focus
  - d) Distance between the image and the object
43. What is RGB?
- a) Red, Green, Blue\*
  - b) Secret service in Russia
  - c) R cell, G cell and B cell in eye
  - d) Blood components
44. What is HD?
- a) Hard Disk
  - b) Hyper Density
  - c) High Definition\*
  - d) Hello Denmark
45. Which of these is a design activity in film?
- a) Title graphics
  - b) Sound
  - c) Cinematography
  - d) All of the above\*
46. In pressure cooker, what does a pressure valve do?
- a) Convert atmospheric pressure into cooking pressure
  - b) Relieve excessive pressure automatically\*
  - c) Open inside pressure to outside to match
  - d) All of the above
47. How does a match light fire?
- a) Due to dryness on stick, the chemicals on the surface catches fire
  - b) Due to high temperature by means of pressure and friction\*
  - c) Due to high speed movement of the stick against the surface
  - d) None of the above

48. What is fine art?
- a) Artistic activity valued mostly for aesthetics\*
  - b) Artistic activity not meant for money
  - c) Artistic activity, which looks fine
  - d) All non-design activities
49. The form of picture writing used by Egyptians?
- a) Cuneiform
  - b) Pentagram
  - c) Hieroglyphs\*
  - d) Etching
50. Which among these is not a folk art?
- a) Pat Chitra
  - b) Warli Painting
  - c) Madubani
  - d) Amar Chitra\*
51. What is a parchment?
- a) Wall around a balcony
  - b) Animal skin used for writing\*
  - c) Processed paper
  - d) Recycled paper
52. What is a relief art?
- a) Sculpture in which forms project out from base\*
  - b) Paintings in which landscape is portrayed
  - c) Stone sculpture with mixed media
  - d) All of the above
53. Which among them is not a percussion instrument?
- a) Triangle
  - b) Tumbak
  - c) Timbal
  - d) Trombone\*

54. A hygrometer measures \_\_\_\_\_

- a) amount of heat generated
- b) amount of moisture in air\*
- c) amount of steam in boiler
- d) amount of heat in atmosphere

55. How are crystals formed?

- a) Atoms arranged in regular repeating pattern\*
- b) Water flows to settle particles
- c) When particles settle, they form regular form
- d) None of the above

56. Why is it difficult to hit a fly?

- a) Flies have a built in ability to fly in random motion to escape
- b) Flies have stronger wings with which they fly away
- c) Flies have compound eye with which it can see more\*
- d) Flies have strong legs with which they jump to take off

57. Pick the best description for the product shown:



- a) Utility, simplicity, Optimum material use\*
- b) Common, Indian origin, Good for cooking
- c) Inconvenient, difficult to hold, not very effective
- d) Handle is missing, inside coating is missing, low height

58. Many insects have colors and patterns which make them look like leaves, flowers etc. This phenomenon is to \_\_\_\_\_

- a) create an ecosystem of homogenous organisms
- b) choose the appropriate food
- c) match with environment to attract mate
- d) be unnoticed by its predators\*

59. Some of human body parts work like levers. They are:

- a) Elbow & Arm\*
- b) Tongue & Throat
- c) Ear and Head
- d) All of the above

60. What is the obvious problem in the picture shown?



- a) Car on right is at high speed
- b) Car behind the man is approaching too close to the footpath
- c) The pedestrian stop is ignored\*
- d) Nothing is wrong

## SEED Sample Paper 2

1. What is beat in music?
  - a) Rock music
  - b) Dance music
  - c) Rhythm of Music\*
  - d) Strong and weak accent
  
2. What is JPEG?
  - a) Joint Photography Expertise Group
  - b) Joint Photographers Experts Group
  - c) Joint Photographic Experts Group\*
  - d) Junior Photographic Expert Group
  
3. In inkjet printer \_\_\_\_\_
  - a) image is formed by means of minute jets of Ink\*
  - b) image is formed by means of a laser activated Jet
  - c) image is formed by means of toner color attracted on to a cylinder and ink is transferred on to paper
  - d) none of the above
  
4. Who is not a musician of Indian origin?
  - a) Freddie Mercury
  - b) Louis Banks\*
  - c) Usha Uthup
  - d) Garry Lawyer
  
5. Which is not an Indian performing art?
  - a) Kabuki\*
  - b) Mohiniyattam
  - c) Odissi
  - d) Yakshaganam

6. In pressure cooker, what does a pressure valve do?
- a) Convert atmospheric pressure into cooking pressure
  - b) Relieve excessive pressure automatically\*
  - c) Open inside pressure to outside to match
  - d) All of the above
7. How does a match light fire?
- a) Due to dryness on stick, the chemicals on the surface catches fire
  - b) Due to high temperature by means of pressure and friction\*
  - c) Due to high speed movement of the stick against the surface
  - d) None of the above
8. What is fine art?
- a) Artistic activity valued mostly for aesthetics\*
  - b) Artistic activity not meant for money
  - c) Artistic activity, which looks fine
  - d) All non-design activities
9. The form of picture writing used by Egyptians?
- a) Cuneiform
  - b) Pentagram
  - c) Hieroglyphs\*
  - d) Etching
10. Which among these is not a folk art?
- a) Pat Chitra
  - b) Warli Painting
  - c) Madubani
  - d) Amar Chitra\*
11. What is a parchment?
- a) Wall around a balcony
  - b) Animal skin used for writing\*
  - c) Processed paper
  - d) Recycled paper
12. What is a relief art?
- a) Sculpture in which forms project out from base\*
  - b) Paintings in which landscape is portrayed

- c) Stone sculpture with mixed media
- d) All of the above

13. Which among them is not a percussion instrument?

- a) Triangle
- b) Tumbak
- c) Timbal
- d) Trombone\*

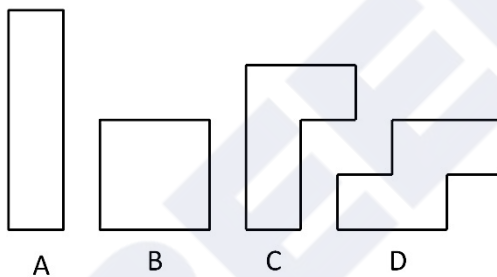
CAREERS360

14. A hygrometer measures \_\_\_\_\_
- a) amount of heat generated
  - b) amount of moisture in air\*
  - c) amount of steam in boiler
  - d) amount of heat in atmosphere
15. How are crystals formed?
- a) Atoms arranged in regular repeating pattern\*
  - b) Water flows to settle particles
  - c) When particles settle, they form regular form
  - d) None of the above
16. Why is it difficult to hit a fly?
- a) Flies have a built in ability to fly in random motion to escape
  - b) Flies have stronger wings with which they fly away
  - c) Flies have compound eye with which it can see more\*
  - d) Flies have strong legs with which they jump to take off
17. Pick the best description for the product shown:
- A photograph of a traditional Indian metal cooking pan, known as a kadai or wok. It is a shallow, wide, bowl-shaped pan with two small handles on opposite sides. The pan appears to be made of a dark metal, possibly iron or steel, and has a slightly worn, reflective surface.
- a) Utility, simplicity, Optimum material use\*
  - b) Common, Indian origin, Good for cooking
  - c) Inconvenient, difficult to hold, not very effective
  - d) Handle is missing, inside coating is missing, low height
18. Many insects have colors and patterns which make them look like leaves, flowers etc. This phenomenon is to \_\_\_\_\_
- a) create an ecosystem of homogenous organisms
  - b) choose the appropriate food
  - c) match with environment to attract mate
  - d) be unnoticed by its predators\*
19. Some of human body parts work like levers. They are:
- a) Elbow & Arm\*
  - b) Tongue & Throat
  - c) Ear and Head
  - d) All of the above

20. What is the obvious problem in the picture shown?

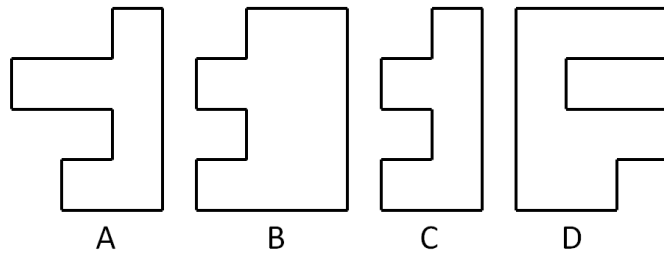


- a) Car on right is at high speed  
b) Car behind the man is approaching too close to the footpath  
c) The pedestrian stop is ignored\*  
d) Nothing is wrong
21. Given that the areas of all of them are the same, which of these will have the smallest perimeter?



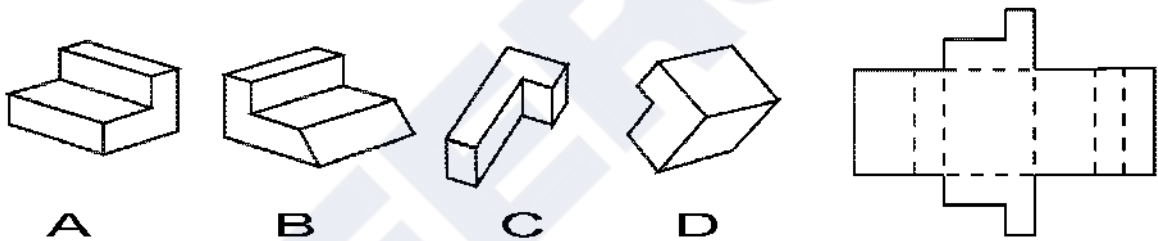
- a) A  
b) B\*  
c) C  
d) D
22. A clock shows 10 hours, 10 minutes and 10 seconds. The angle between each pair of arms will be \_\_\_\_\_
- a) 101 degrees  
b) 120 degrees\*  
c) 145 degrees  
d) 150 degrees

23. Which of the following two will fit in to form a square (Figures are to the scale and you may rotate them).



- a) A and B
- b) A and C
- c) A and D\*
- d) B and D

24. Which of the following paper boxes has been unfolded to generate the layout surface shown on the right side?

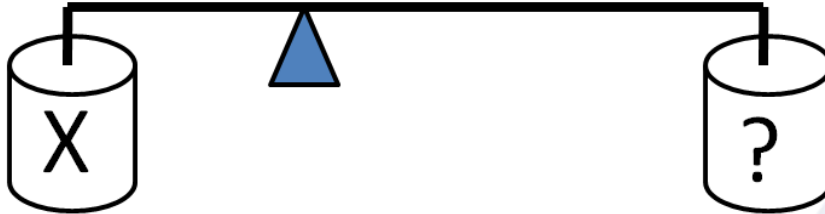


- a) A\*
- b) B
- c) C
- d) D

25. If we throw two iron balls of different weights from a 10 storey building, then \_\_\_

- a) The heavier ball will hit the earth first
- b) The lighter ball will hit the earth first
- c) Both will hit together\*
- d) Depends on probability

26. Shown here is a diagram (to the proportionate scale) of a lever-fulcrum system with two cans of water. The can labeled X has 1 liter of water. How much quantity of water is required in the other can to balance the lever?



- a) 500 ml\*  
b) 1 liter  
c) 2 liter  
d) 3 liter
27. \_\_\_\_\_ has a tactile sensation.
- a) Canvas  
b) Space  
c) Texture\*  
d) Brown
28. The technique of using lines to bring light and shade in an artwork is called \_\_\_\_\_
- a) landscaping  
b) stippling  
c) shading  
d) hatching\*
29. A single dot in a space \_\_\_\_\_
- a) looks incomplete  
b) means nothingness  
c) vague  
d) looks lonely\*
30. In figure drawing the human proportion is measured with the proportion of \_\_\_\_\_
- a) Hands  
b) Ear  
c) Head\*  
d) Leg

31. Area is .....
- a) Quantity that expresses the extent of 2D surface or shape\*
  - b) Length + Breadth of any shape
  - c) Height x Diameter
  - d) None of the above
32. A circle of diameter D and a square of side D are cut out of paper. Which one would have larger area?
- a) the circle
  - b) the square\*
  - c) both areas are equal
  - d) none of the above
33. Aranmula Kannadi is
- a) Metal alloy mirror\*
  - b) Silvered glass mirror
  - c) Mirror with copper sulphate
  - d) None of the above
34. The handicraft depicted below is famous in

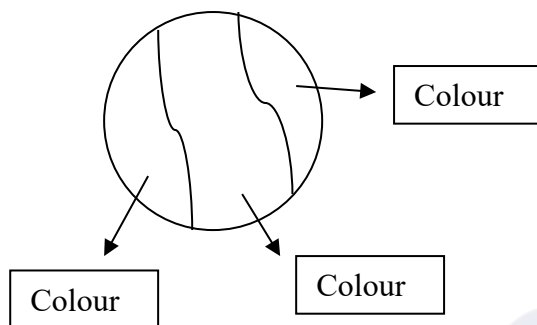


- a) Madurai
  - b) Hyderabad
  - c) Manipur
  - d) West Bengal\*
35. \_\_\_\_\_ is known as the mother of Madhubani Papier Mache
- a) Subhadra Devi\*
  - b) Sunanda Devi
  - c) Madhuri Devi
  - d) None of the above

36. Two or more gears working together can produce \_\_\_\_\_

- a) mechanical advantage\*
- b) skip
- c) lower the advantage
- d) none of the above

37. This design task is given to students in an art class to paint the figure with only two colours. But 5 colours are available. How many different designs can be generated by painting the given picture?



- a) 60
- b) 20\*
- c) 10
- d) 40

38. In colour theory two colours are complementary if mixed in the proper proportion, they produce .....

- a) blue
- b) green
- c) red
- d) neutral colour\*

39. The circulatory system in the human body

- a) defies gravity\*
- b) with gravity
- c) with marcel
- d) none of the above

40. Objects can be said to have the colour of light

- a) leaving their surfaces\*
- b) absorbed by the object
- c) generated by the object
- d) non spectral colours

41. Primary colours in CRT display are
- a) red-yellow-blue
  - b) orange-green-violet
  - c) red-green-yellow
  - d) red-green-blue\*
42. 'Century Gothic' is \_\_\_\_\_ font
- a) sans-serif\*
  - b) serif
  - c) sheriff
  - d) none of the above
43. In a horseshoe the center of mass is situated
- a) on the horseshoe
  - b) outside the horseshoe\*
  - c) on one arm of the horseshoe
  - d) none of the above
44. Two polygons of the same number of sides are similar if, their corresponding angles are \_\_\_\_\_.
- a) unequal
  - b) proportional
  - c) non linear
  - d) equal\*
45. All squares are
- a) congruent
  - b) similar\*
  - c) equal
  - d) parallel
46. Leonardo da Vinci was a
- a) architect
  - b) mathematician
  - c) none of the above
  - d) all of the above\*

47. Here is a very famous painting by a famous painter \_\_\_\_\_ .



- a) Van Gogh
- b) Leonardo da Vinci
- c) Edward Munch\*
- d) M F Husain

48. The painter of ' The Scream ' was \_\_\_\_\_

- a) Minimalist
- b) Expressionist\*
- c) Realist
- d) Impressionist

49. Warli art originated in the \_\_\_\_\_ period

- a) Paleolithic
- b) Mesolithic
- c) Semi modern
- d) Neolithic\*

50. Animation is the rapid display of a sequence of images to create \_\_\_\_\_ of movement

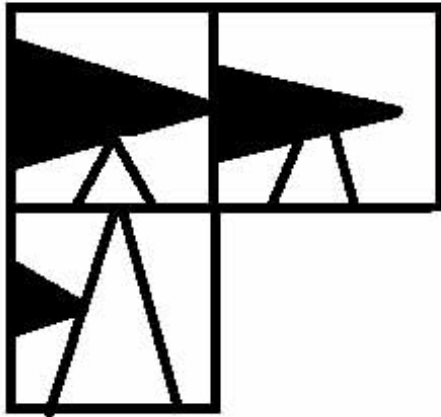
- a) a subjection
- b) an illusion\*
- c) a creativity
- d) an incident

51. Algoze is an Indian \_\_\_\_\_

- a) flute (bansuri)
- b) double flute\*
- c) triple flute
- d) none of the above

52. Rudra Veena is \_\_\_\_\_
- a) mostly played by many classical artists in south India
  - b) mostly played by many classical artists of North India
  - c) mostly played popularly by any classical artists of Banaras.
  - d) rarely played today\*

53. Find the missing square in the following



a



b



c



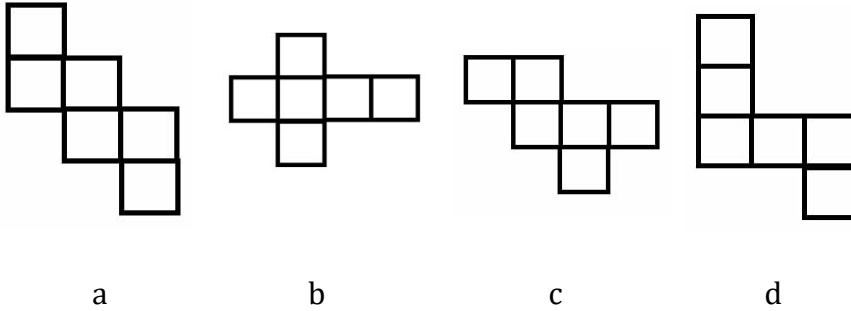
d

Answer is 'c'

54. The study or collection of coins is called


- a) Numismatics\*
- b) Semantics
- c) Synectics
- d) Synergitics

55. Which of the following cannot be folded into a cube? (answer is d)



56. Imagine you are able to turn the right side square. How much turn would the left side square (if it turns) make?

- a) the left one would move half of right since they are both square
- b) gears would continue to spin as if it is circular\*
- c) the left one would move double of right since they are square
- d) none of the above



57. The Golden proportion is

- a) 1:1.414234
- b) 1:1.618034\*
- c) 1.1.732434
- d) 1:1.818034

58. Carbon footprint refers to \_\_\_\_\_.

- a) the amount of carbon present in the waste in five year period
- b) greenhouse gas carbon-di-oxide emitted over five year period
- c) the amount of carbon in the ozone layer causing the green house effect
- d) the amount of carbon-di-oxide we emit individually in any one year period\*

59. Which country among the followings this mask denotes to?



- a) China
- b) Africa\*
- c) Japan
- d) Russia

60. The Japanese word MANGA refers to \_\_\_\_\_

- a) cartooning
- b) characters of Japan
- c) comics
- d) comics and cartooning\*

## SEED Sample Paper 3

1. When all elements are in agreement, a design is considered.....


- a) Unified\*
- b) Loyal
- c) Sincere
- d) Identified

2. Which visual design principle is mainly reflected in the image below?



- a) Simplicity
- b) Proportion
- c) Rhythm
- d) Unity\*

3. What is the photographer trying to depict in the picture below?



- a) Beauty
- b) Vastness of sky
- c) Proportion\*

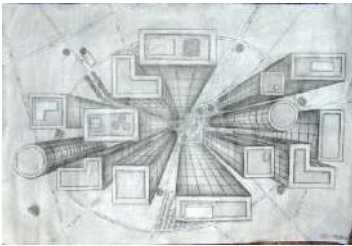
d) Architecture

4. The view below is called as.....



- a) Eye level view
- b) Below eyelevel view
- c) Low view
- d) Bird view\*

5. The image below most aptly refers to.....



- a) Geometry
- b) Architecture
- c) Interior
- d) Perspective\*

6. Theories of Visual Perception developed by German psychologists in the 1920s refer to.....

- a) Gravitation
- b) Perfection
- c) Gestalt\*
- d) Motion

7. The viewer's eye will naturally follow a line or curve. Then it is.....

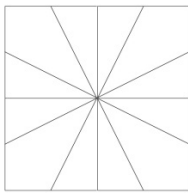
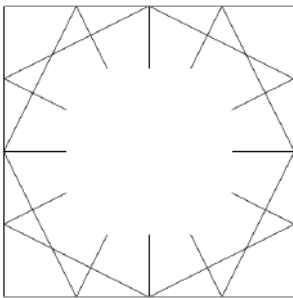
- a) Following

- b) Chain
  - c) Flow
  - d) Continuation\*
8. Perspective is connected with the sense of .....
- a) Vision
  - b) Space
  - c) Elements
  - d) Distance\*
9. All Objects that have mass, take up.....
- a) Space\*
  - b) Visual
  - c) Dimension
  - d) None
10. .... is the lack of weight or substance.
- a) Mass
  - b) Void\*
  - c) Space
  - d) Illustration
11. What is Achromatic Harmony?
- a) Neutrals such as a combination of Black & White\*
  - b) Neutrals such as a combination of Red & Blue
  - c) Neutrals such as a combination of Orange & Yellow
  - d) Neutrals such as a combination of Purple & Green
12. Attention is drawn to the different elements in this composition because it breaks the pattern to .....

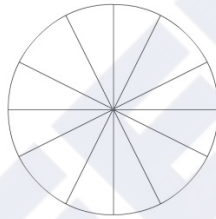


- a) Closure
- b) Similarity\*
- c) Group
- d) Continuation

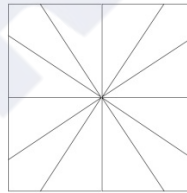
13. Select a suitable image from the four options given that will fit in the image below.



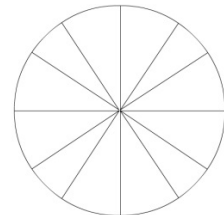
a)\*



b)



c)



d)

14. The object in the picture below, under the cloth (Towel) looks like a chair because .....



- a) Cloth is in the shape of chair
- b) There are always four chairs around the table
- c) There are three other chairs around\*

d) It's not a chair

15. We can see one and half window in the picture. How many windows are there in real?



- a) Three\*
- b) One and half
- c) Two
- d) Four

16. Which of the following shapes are required to create the word 'Hello' as shown in the picture?



**1. H 2. L 3. O 4. E**


- a)
- b)\*
- c)
- d)

17. How many Bicycles are there in the picture below?




- a) 7\*
- b) 8
- c) 5
- d) 9

18. Identify the animal hidden in the image below.



- a) Dog
- b) Cat
- c) Zebra
- d) Horse\*

19. Find the mirror image of the line of dots given below.



a)

b)

c)

d)\*

20. How many elements are there in the picture below?




- a) One hand and One pot
- b) Two hands and one pot\*
- c) Two hands and two pots
- d) One hand and two pots

21. What does the 'g' in the image below stand for?



- a) Guitar
- b) Girl
- c) Giraffe\*
- d) Growth

22. Which is the suitable expression among the following for showing happiness?



- a) 2
- b) 1\*
- c) 3
- d) 4

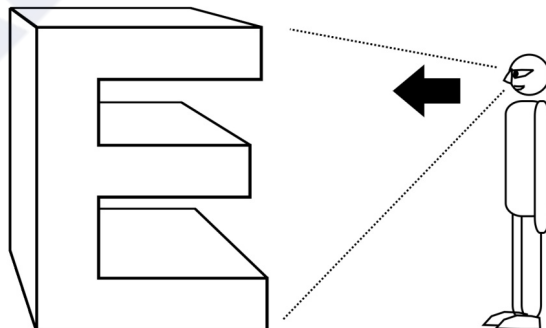
23. The three lion symbol used by Government of India is the inspiration from .....

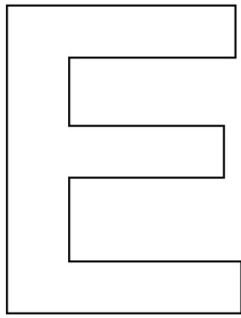
- a) Ajantha cave
- b) Sarnath\*
- c) Lion king movie
- d) Indus valley coins

24. Which is the vignette colour shade used on ICICI Bank display board.

- a) Deep orange to light orange\*
- b) Red to yellow
- c) Blue to pink
- d) Magenta to light magenta

25. When the letter "E" in 3D given below is viewed from the direction indicated, which is the appropriate image seen by the observer out of the four options given below?






a



b



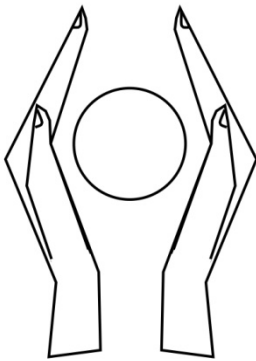
c



d

c\*

26. Select a suitable 'caption' for the below given image out of the options given.



- a) Save water
- b) Save power
- c) Donate blood
- d) Save earth\*

27. Select one suitable 'Type' (Font) for the title Aishwarya Jewellers out of the options given below.

a. *Abcdefghijklmn*

c. Abcdefghijklmn

b. **Abcdefghijklmn**

d. **Abcdefghijklmn**

a.\*

28. Which of the following is true for the form of chair shown here.



- a) Symmetrical
- b) Abstract\*
- c) Repetition
- d) Rugged

29. Arrangement of leaves in the coconut tree is .....



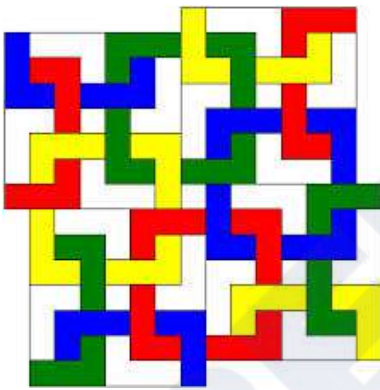
- a) Dynamic
- b) Radial\*
- c) Symmetrical
- d) Vertical

30. Which one of the following options is true for the given image?




- a) Bold
- b) Soft
- c) Rhythm\*
- d) Balance

31. How many complete square Polygons are there in the given image?




- a) 6
- b) 8
- c) 9\*
- d) 11

32. Which layer is in the front?



- a) Red
- b) Blue
- c) White
- d) Red, White\*

33. What is the nearest ratio of black (B) and light (L) in the image?



- a) 40 %(B), 60%(L)\*
- b) 10 %(B), 90%(L)
- c) 20 %(B), 80%(L)
- d) 30 %(B), 70%(L)

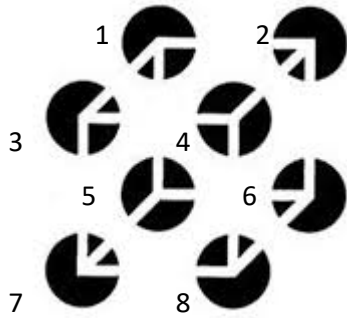
34. The Jali work in the image shown is an example of .....



- a) Rajput Architecture

- b) Mughal Architecture\*
- c) Roman Architecture
- d) Greek Architecture

35. Which four circles appears to be in the front?



- a) 1, 2, 3, 4
- b) 5, 6, 7, 8
- c) 3, 4, 7, 8\*
- d) 1, 3, 5, 7

36. How many spikes are the farthest from a viewer?




- a) 1\*
- b) 2
- c) 3
- d) 4

37. Which one of the following statements is false?




- a) Woman is wearing a necklace
  - b) Woman has black hair
  - c) Woman's ear is visible
  - d) Woman's neck is not visible\*
38. Random white dots put on a plane black surface is close to an interpretation of .....
- a) Positive
  - b) Negative
  - c) Pattern
  - d) Sky\*
39. Thin and thick lines vertically aligned forms a .....
- a) Square
  - b) Parallelogram
  - c) Barcode\*
  - d) Rectangle
40. An extended dot is a .....
- a) Shape
  - b) Texture
  - c) Form
  - d) Line\*
41. An outline of an element is called.....
- a) Boundary
  - b) Limit

- c) Contour\*
- d) Edge
42. An extrusion of a shape adds..... to its original form.
- a) Length
- b) Height
- c) Dimension\*
- d) Corners
43. .... has a tactile sensation.
- a) Canvas
- b) Space
- c) Texture\*
- d) Brown
44. Addition of white to a color makes..... of it.
- a) Tint\*
- b) Tone
- c) Pigment
- d) Shade
45. Which of the followings is the correct version of the logo of online site 'Pinterest'?



46. What does following symbol mean in the World Wide Web?



- a) Link
- b) Attachment
- c) Download
- d) Share\*

47. Which is the most famous comic book character created by Bob Kane?

- a) Superman
- b) Tarzan
- c) Batman\*
- d) Wolverine

48. The animated film 'The Lord of the Rings' (1978) was created by.....

- a) Ralph Bakshi\*
- b) Walt Disney
- c) Hanna Barbara
- d) Dreamworks Animation

49. Following in the image is.....



- a) Odometer
- b) Speedometer
- c) Tachometer\*
- d) Timer

50. Identify the logo:



- a) Good Homes
  - b) Nestle\*
  - c) Cadbury
  - d) Dr. Salim Ali Foundation
51. The Primary colours called as 'Primary' because.....
- a) Most of colours can be mixed by mixing these colours\*
  - b) These colours are comparatively cheap in price
  - c) They are available in the largest quantity in nature
  - d) All of the above
52. What is not a Hue from the followings.....
- a) Red
  - b) Purple
  - c) Mango\*
  - d) Green
53. Analogous colours are.....
- a) Three or more Hues which are positioned next to each other on the Color Wheel\*
  - b) Hues which lie opposite to each other on the colour wheel

- c) Hues that do not have any common colour
  - d) Hues which are grey
54. Which of the following is the property of Perspective.....
- a) Distortion\*
  - b) Warm Colours
  - c) Shade & Light
  - d) Shape
55. Gradation can be used to create.....
- a) Flat Colours
  - b) Dark Colours
  - c) Skin Colours
  - d) Depth\*
56. Distant mountains appear little bluer due to.....
- a) Earth Colour
  - b) Illusion
  - c) Atmospheric Perspective\*
  - d) Rivers
57. Highlight is created where the rays of light are.....
- a) parallel to the object's surface
  - b) too intense
  - c) golden
  - d) perpendicular to the object's surface\*
58. What is more accurate: Everything in this world is visible due to.....
- a) Light\*
  - b) Shade
  - c) Eyes
  - d) Sense

59. What is this medical pictogram depicting?



- a) Urology
- b) Neurology
- c) Respiratory\*
- d) Cardiology

60. What is this astronomical symbol depicting?



- a) Pluto
- b) Uranus
- c) Earth
- d) Jupiter\*

## SEED Sample Paper 4

1. Which of the animals listed below is considered the universal representation of peace.

- a) Dove\*
- b) Cuckoo
- c) Peacock
- d) Hummingbird

2. Which of these might be an example of symbolism in a story?

- a) A girl eating ice cream
- b) A tree representing new life\*
- c) A box being opened at Christmas
- d) Trees whispering in the wind

3. Using an object to represent an idea, means.....

- a) Symbolism\*
- b) Metaphor
- c) Simile
- d) Allusion

4. The Conch is emblem of which Indian state?

- a) Karnataka
- b) Tamilnadu
- c) Orissa
- d) Kerala\*

5. Following image is a symbol for depicting.....



- a) Confusion\*
- b) Ideas
- c) Directions
- d) All of the above



6. Select the correct sequence of these four Colors used for offset printing.


- a) BPYB
- b) CMYB
- c) CRYB
- d) CMYK\*

7. The following picture is the hood ornament of which luxury car brand?



- a) Range Rover
- b) Rolls Royce\*
- c) Bentley
- d) Austin

8. Following picture is the part of which sculpture?



- a) Priest king\*
- b) Priest queen
- c) Priest master
- d) None of the above

9. Which Indian musical instrument is this?



- a) Sitar\*
- b) Sarod
- c) Veena
- d) Sarangi

10. The following artist is a.....



- a) Puppeteer
- b) Mime artist\*
- c) Circus artist
- d) None of the above

11. What could the following mudra mean?



- a) Snake
- b) Butterfly
- c) Eagle\*
- d) Fish

12. This dress is traditionally worn by women of which country?




- a) Hungary\*
- b) Portugal
- c) Spain
- d) Brazil

13. This distinct motif seen commonly in Indian textiles derives its name 'Paisley' from a small town found in which country?



- a) India
- b) Scotland, UK\*
- c) Persia
- d) Iran

14. This distinctive mud art known as 'Lippan' is practiced in which state of India?



- a) Rajasthan
- b) Haryana
- c) Uttar Pradesh
- d) Gujarat\*

15. The Coromandel Coast in South-East India is home to which painted textile?



- a) Patachitra
- b) Kalamkari\*
- c) Gond painting
- d) Soara

16. This palace in Transylvania, Romania is the setting for which widely enjoyed work of horror fiction?



- a) Carrie by Stephen King

- b) Dracula by Bram Stoker\*
- c) Strange case of Dr. Jekyll and Mr. Hyde by R. L. Stevenson
- d) Frankenstein by Mary Shelley

17. Recognize this folk art of storytelling.



- a) Kawad\*
- b) Patachitra
- c) Warli
- d) Madhubani

18. Identify this step-well, which is also a World Heritage Site.



- a) Agasen ki Baoli
- b) Raniji ki Baori
- c) Rajon ki Baoli
- d) Rani ki Vav\*

19. Hollywood movie 'The Theory of Everything' is a biographical film based on the life of which well-known British scientist?



- a) Stephen Hawking\*
- b) John Nash
- c) Tim Berners-Lee
- d) Jocelyn Bell Burnell

20. Maoris; the indigenous people of New Zealand use a traditional form of tattooing to signify rank and status of a person. What is this permanent marking called?



- a) Ta Moko\*
- b) Pe'a
- c) Katakana
- d) Antigua

21. What is the Indonesian technique of producing intricate patterns by wax-resist dyeing fabric called?



- a) Block printing

- b) Bandhani
- c) Embroidery
- d) Batik\*

22. Identify this Varanasi born duo of Hindustani Classical vocalists who are also brothers.



- a) Rajan and Sajan Mishra\*
- b) Umakant and Ramakant Gundecha
- c) Ganesh and Kumaresh
- d) Fateh Ali and Murad Ali

23. This indigenous South African music instrument was widely used to produce an annoying sound during the Football world Cup 2013. What is it?



- a) Xosa Uhadi
- b) Akadinda
- c) Cununo
- d) Vuvuzela\*

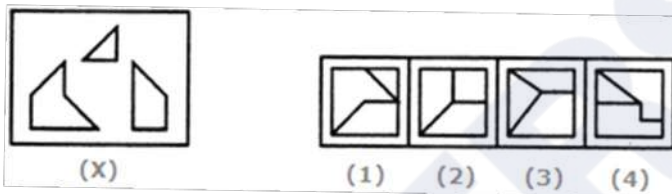
24. Identify the home country of this newly wedded couple.



- a) Indonesia
  - b) Bahrain
  - c) Sri Lanka\*
  - d) Thailand
25. You can use the numbers 3, 4, 5 as often as you wish. You can use the basic mathematical operations: plus, minus, division, multiplication. In how many different ways can you arrange the numbers to give the exact total of 30?
- a) 4\*
  - b) 6
  - c) 2
  - d) 8
26. Which of the following pairs have no association with each other?
- a) Garage and dark
  - b) Law and delay
  - c) Computer and thinking\*
  - d) Bat and night
27. Oar is to rowboat as foot is to.....
- a) Running
  - b) Sneaker
  - c) Skateboard\*
  - d) Jumping

28. Find the statement that must be true according to the given information.
- "Erin is twelve years old. For three years, she has been asking her parents for a dog. Her parents have told her that they believe a dog would not be happy in an apartment, but they have given her permission to have a bird. Erin has not yet decided what kind of bird she would like to have".
- Erin's parents like birds better than they like dogs
  - Erin does not like birds
  - Erin and her parents live in an apartment\*
  - Erin and her parents would like to move

29. Find out which of the figures (1), (2), (3) and (4) can be formed from the pieces given in figure (X).



- 1\*
  - 2
  - 3
  - 4
30. Look carefully at the sequence of symbols to find the pattern. Select the correct option to complete the pattern.



- 1
- 2
- 3\*
- 4

31. Choose the pair from the options given that best represents a similar relationship to the one expressed in the original pair of words.

DEPENDABLE : CAPRICIOUS

- a) Fallible : Cantankerous
- b) Erasable : Obtuse
- c) Malleable : Limpid
- d) Capable : Inept\*

32. Find the word that names a necessary part of the underlined word.

Hurricane

- a) Beach
- b) Cyclone
- c) Damage
- d) Wind\*

33. Here are some words translated from an artificial language.

*lelibroon* means yellow hat,

*plekafroti* means flower garden,

*frotimix* means garden salad.

Which word could mean "yellow flower"?

- a) Lelifroti
- b) Lelipleka\*
- c) Plekabroon
- d) Frotibroon

34. 'Sports' is related to 'logo' in the same way as 'Nation' is related to.....

- a) Anthem
- b) Emblem\*
- c) Ruler
- d) None of these

35. Arrange the words given below in a meaningful sequence.  
1. Elephant    2. Cat    3. Mosquito    4. Tiger    5. Whale
- a) 5, 3, 1, 2, 4
  - b) 1, 3, 5, 4, 2
  - c) 3, 2, 4, 1, 5\*
  - d) 2, 5, 1, 4, 3
36. You have spent the last 48 hours on a creative brief and your brain seems to have frozen. You need to find a title for a new Disney movie on 'talking furniture'. Keeping the design process in mind what would your next resort be?
- a) Scan a magazine
  - b) Lateral thinking\*
  - c) Vertical Thinking
  - d) Buy yourself more time
37. Copywriter, Account manager, flyposting, hard sell, livery, viral marketing are words associated with which of the following?
- a) Advertising\*
  - b) Public relations
  - c) Branding
  - d) Marketing
38. Predators, Deciduous, Temperate, Habitat, Canopy, War-bler and Adaptation are the words associated with which of the following?
- a) Forest\*
  - b) Wild life
  - c) Urban life
  - d) Rural life
39. Associate the following pictures with one of the moods given below:



- a) Anger
  - b) Youthful
  - c) Melancholic\*
  - d) Agitated
40. 'Kalaghoda Art Festival' is celebrated at one of the following cities,
- a) Pune
  - b) Mumbai\*
  - c) Aurangabad
  - d) Hyderabad
41. The 'Sistine Chapel' ceiling was painted by
- a) Rembrandt
  - b) Vermeer
  - c) Michelangelo\*
  - d) Picasso
42. To which deity is the main temple at Konark dedicated?
- a) Lord Shiva
  - b) Goddess Parvati
  - c) Lord Ganesha
  - d) Surya or Sun God\*
43. Bodo, Konkoni, Dogri, Maithali and Santhali are all.....
- a) States
  - b) Languages\*
  - c) Dance forms
  - d) Games

44. Red is symbolic of Marriage in India, in the Western countries it is .....

- a) Purple
- b) Black
- c) Cream
- d) White\*

45. Koya, Toda, Korcu, Santhal and Gond are.....

- a) Tribal Art Styles\*
- b) Names of People
- c) Names of Tribal Communities
- d) Names of Villages

46. Manuscripts in Europe were first written on.....

- a) Paper
- b) Papyrus
- c) Vellum\*
- d) Palm

47. He is known as the Father of Indian Animation.

- a) Ram Mohan\*
- b) Walt Disney
- c) Anant Pai
- d) Dhimant Vyas

48. Which of these animals is not on the Ashoka Pillar at Sarnath?

- a) Horse
- b) Elephant
- c) Bull
- d) Tiger\*

49. The first form of block printing was done in.....

- a) Mohenjo-daro
  - b) China\*
  - c) Greece
  - d) Mesopotamia
50. The Charkha is a symbol of.....
- a) Non-violence
  - b) Swaraj
  - c) Swadeshi\*
  - d) Partition
51. Zari is made from.....
- a) Silk
  - b) Metal\*
  - c) Cotton
  - d) Beads
52. Biodegradable waste should be.....
- a) Incinerated
  - b) Composted\*
  - c) Land filled
  - d) Dumped
53. What among the followings is not considered a clean source of energy?
- a) Hydro Power
  - b) Wind Power
  - c) Nuclear Power\*
  - d) Solar Power
54. The statuette of the Dancing Girl came from.....



- a) Mohenjo-daro\*
- b) China
- c) Greece
- d) Mesopotamia

55. The following is an example of....



- a) Miniature painting from Rajasthan
- b) Tanjore painting from Karnataka
- c) Kalamkari from Andhra Pradesh
- d) Gond Art from Central India\*

56. Art Nouveau evolved during..... period.

- a) 1700-1800
  - b) 1600-1700
  - c) 1885-1910\*
  - d) 2000-2010
57. "Internet Art" evolved during.....
- a) 14th Century
  - b) 15th Century
  - c) Late 20th Century\*
  - d) Early 17th Century
58. The famous quote, "have nothing in your homes that you do not know to be useful or believe to be beautiful" is by.....
- a) William Morris\*
  - b) Philip Webb
  - c) Michael Angelo
  - d) Socrates
59. Who is known as founder of Calendar Art in India?
- a) Vasudeo Gaitonde
  - b) Lord Bentinck
  - c) MF Husain
  - d) Raja Ravi Varma\*
60. Select the arrangement of the art movements in order of their existence in the Western Art during 1150 to 1600 from the options below.
- a) Northern Renaissance, Gothic Art, the High Renaissance and Mannerism
  - b) Gothic Art, the High Renaissance and Mannerism, Northern Renaissance
  - c) High Renaissance, Mannerism, Gothic Art, Northern Renaissance
  - d) Gothic Art, the High Renaissance, Mannerism and the Northern Renaissance\*

## SEED Sample Paper 5

1. Which country do you think the following vessel belongs to?



- a) Japan
  - b) India
  - c) Thailand
  - d) China\*
2. An attribute of human sight, which helps in seeing films.
- a) Stereo vision
  - b) Persistence of vision\*
  - c) Binocular vision
  - d) Camera vision
3. What is the structure in the image below called?



- a) Vietnamese Shrimp nets
  - b) Chinese fishing nets\*
  - c) Balinese weed net
  - d) Philippines floating nets
4. Which famous museum is designed like a helix?
- a) Rockefeller Museum
  - b) Prince of Wales Museum
  - c) MoMA
  - d) Guggenheim Museum\*

5. What is the name of the South Indian Monk who founded the tradition and teaching of martial arts at the Shaolin Temple?
- a) Bodhidharma/Ta Mo\*
  - b) Daoxuan
  - c) Takuan
  - d) Buddhabhadra/Batuo

6. Identify the location?



- a) Ajantha caves
  - b) Edakkal caves
  - c) Sanchi caves
  - d) Elephanta caves\*
7. If general rule is that all crows are black and you see a brown bird, you declare that:
- a) All crows are not Black
  - b) Some crows could be brown
  - c) The bird is not a crow\*
  - d) Brown bird could be a crow
8. Which of this term is not associated with digital photography?
- a) Shutter
  - b) Flash
  - c) Bit depth
  - d) Virulent\*
9. Which term is not associated with digital filmmaking?

- a) Dubbing
- b) Storyboard
- c) Script
- d) Clap board\*

10. What is the name of the company making comic books in India, which was jointly started by Branson, Deepak Chopra and Shekhar Kapoor?

- a) Virgin Comics
- b) Devi Comics
- c) Moving Image\*
- d) Imagine Comics

11. Japanese Manga Comics are normally written and read ...

- a) Front to Back
- b) Back to Front\*
- c) Top to Bottom
- d) As randomly numbered Chapters

12. What kind of building is in the image?



- a) School
- b) Mosque
- c) Fort
- d) Church\*

13. What is not associated with digital sound?

- a) Surround sound
- b) Transponder\*
- c) Mixer
- d) Analogue digital converter

14. Who is known for being the founder of Calendar Art in India?
- a) Raja Ravi Verma\*
  - b) Vasudeo Gaitonde
  - c) Lord Bentinck
  - d) Sudhakar Nadkarni
15. What is the name of the special effects company most commonly associated with George Lucas?
- a) Looking Glass
  - b) Industrial Light and Magic\*
  - c) Pixar
  - d) Spycraft

16. The image shown belongs to a visual culture from:



- a) Western Classical period\*
- b) Western Modern period
- c) Eastern Contemporary period
- d) Oriental Modern period

17. What is not associated with digital video?

- a) Codec
- b) Modem\*
- c) Graphics card
- d) Editing software

18. Identify the furniture shown in image?



- a) Library furniture
- b) Computer café furniture
- c) Church furniture\*
- d) Class room furniture

19. The name of the first actor to play Mr. Spock in the original 'Star Trek' Serial was:

- a) William Shatner

- b) Jean Luc Picard
- c) David Hasselhoff
- d) Leonard Nimoy\*

20. The following is not part of a mechanical Fastener system

- a) Rivet
- b) Bolt
- c) Alan Key
- d) Turing Bolt\*

21. What is missing in the image?



- a) Road signs
- b) Crossing signs
- c) Parking signs
- d) All above\*

22. Which option is more accurate?



- a) The iron object and trees are zoomed in using a tele-lens
- b) Camera is close to iron object\*
- c) Trees in background is somewhat in focus
- d) Photo was shot in morning

23. How does one get orange colour?

- a) Reducing red from green
- b) Subtracting blue from violet
- c) Adding red to yellow\*
- d) Subtracting yellow ochre from purple and adding lemon yellow

24. How does one get blue colour digitally?

- a) Adding Lemon yellow value to green
- b) Blue cannot be mixed as its pure colour
- c) Subtracting yellow values from Green\*
- d) None of above

25. Which green patch is more towards the shade of the grass just below the tree?



- a) 1\*
- b) 2
- c) 3
- d) None

26. How does one get the colour pink?

- a) Less blue and more red\*
- b) More blue and less red
- c) Equal Blue and red
- d) None of the above

27. What is not associated with vision?

- a) Iris
- b) Cornea
- c) Retina
- d) Incus\*

28. What is not associated hearing?

- a) Echo
- b) Loudness
- c) Frequency
- d) Bass\*

29. What is not associated with vision in poor light?

- a) Rod cells\*
- b) Cone cells
- c) Stem cells
- d) Photo cells

30. What is not associated with animation?

- a) Frames
- b) Characters
- c) Voice
- d) Doubles\*

31. Velcro was inspired from?

- a) Plants\*
- b) Animals
- c) Bees
- d) Cows

32. What is the dark object in the foreground?



- a) Drinking water container
- b) Weight\*
- c) Secured shot
- d) Balloon

33. Prof. Moriarty is a character from which literary work?

- a) Goodbye Mr Chips
- b) The Adventures of Sherlock Holmes\*
- c) Wuthering Heights
- d) A Passage to India

34. The name of Disney's digital animation division is

- a) Waltz
- b) Looking Glass
- c) Pixar\*
- d) Calypso

35. What is an accurate description for the image below?



- a) Only the rods in the front are in focus\*
- b) More or less, all are in focus
- c) Only the players are in focus
- d) None

36. On the road, which set of lines cause the illusion of height?



- a) Black lines
  - b) Grey lines
  - c) White lines\*
  - d) Brown lines
37. One of the following is not a Science Fiction Author
- a) Isaac Asimov
  - b) Robert Silverberg
  - c) Fyodor Dostoyevsky
  - d) Jules Verne\*
38. Haptic Feedback means
- a) Tactile Feedback to User\*
  - b) Auditory Feedback to User
  - c) Olfactory Feedback to User
  - d) Visual Feedback to User
39. What is the significance of the words "You aint heard nothin' yet"?
- a) It was the pet phrase of Frank Sinatra
  - b) They were the first words spoken on-screen in film history\*
  - c) It was Alfred Hitchcock's favorite phrase
  - d) The first words spoken on TV while declaring the Watergate scandal in US
40. What is the meaning of the sign?



- a) As it's near a hospital, no one should make loud noises
- b) No one should play loud music or voices
- c) No air horns\*
- d) No music

41. Zebra body has:



- a) Black lines on white
- b) White lines on black\*
- c) Black and white lines on brown
- d) Black and white lines on grey

42. Why do snakes move to the snake charmer?

- a) Snakes don't have vision. Its scared\*
- b) Snakes imitate the movement, seeing the charmer's moves
- c) Snakes love tunes
- d) None of the above

43. If you toss a regular coin 10 times and it had given a reading of 'heads' consecutively the first 9 times, then the probability of it turning heads the 10th time again is ...

- a) 10%
- b) 50%\*
- c) 90%
- d) 7.50%

44. MMORPG stands for

- a) Massive Multiplayer Online Role-Playing Games\*
- b) Multiple Mark Ordered Rocket Propelling Gun

- c) Micro Maneuvered Onboard Radar-Positioning Guidance
- d) Macro Modeling of Rule-Operative Guidance

45. Why does the train appear tapering to a dot far away?



- a) Perspective vision\*
- b) Because of the roof edge
- c) Because of roof, platform and train body outline
- d) Because of people displacement

46. The earth rotates from?

- a) East to west
- b) West to east\*
- c) North to south
- d) South to north

47. What does monochrome mean?

- a) Single layer
- b) Dual layer
- c) Single colour\*
- d) Dual colour

48. Which of these are not related to printing?

- a) Off set
- b) Letter press
- c) Leading
- d) Letter set\*

49. Why does some clothes fade after wash?
- a) The dye used gets washed off\*
  - b) The dye undergoes chemical changes and stops emitting
  - c) The threads stops emitting colour once in contact with water
  - d) None
50. Light is ....
- a) Energy
  - b) Radiation
  - c) Waves
  - d) All the above\*
51. Why does sky appear blue?
- a) Because of atmospheric temperature and pressure
  - b) Blue colour is a result of light falling on human retina
  - c) Blue wavelength is scattered more\*
  - d) All other colours are absorbed by water content
52. When you browse, which of these can be termed input control?
- a) Button
  - b) Text field
  - c) Check box
  - d) All of the above\*
53. Who was the designer of the computer game called 'Civilization'?
- a) Sid Meir\*
  - b) Chris Foss
  - c) Syd Mead
  - d) George Lucas
54. What is the meaning of the sign shown?



- a) Signal
- b) Volume\*
- c) Waves
- d) Area

55. This author is known for his work on methodologies of thinking and creativity.

- a) Edward De Bono\*
- b) Daniel Dennett
- c) Searle
- d) Richard Dawkins

56. What is the meaning of the sign shown?



- a) Signal\*
- b) Volume
- c) Waves
- d) Area

57. What are the words you think associated with the image?



- a) Build
- b) Increase
- c) Volume
- d) All of the above\*

58. The black box in an airplane is meant to

- a) Self-destruct in case of terrorist attack
- b) Document and protect flight data and voice recordings\*
- c) Eject out on a parachute in case of emergency
- d) Send out a signal flare in an emergency

59. What is the meaning associated with image?



- a) Send
- b) Email\*
- c) Invite
- d) Money

60. What is the meaning associated with image below?



- a) Thinking
- b) Text message\*
- c) Cartoon
- d) None

CAREERS360

## SEED Sample Paper 6

1. What is not associated with films?
  - a) Cinemascope
  - b) Silver screen
  - c) Projector
  - d) Launch\*
  
2. Which Italian city is traditionally known as a leading center of automotive design?
  - a) Pisa
  - b) Ferrara
  - c) Venice
  - d) Turin\*
  
3. Which American city was known for being an Automotive manufacturing hub?
  - a) Austin
  - b) Houston
  - c) Boston
  - d) Detroit\*

4. What is the meaning associated with image below?



- a) Recycle
- b) Reply\*
- c) Replay
- d) Reappear

5. What is the meaning associated with image below?



- a) Proceed
- b) Next
- c) Play\*
- d) Forward

6. What is not associated with films?

- a) 70 mm
- b) 35 mm
- c) 18 mm\*
- d) None

7. The city of Pune is associated with which historical character?

- a) Mohammad Tughlaq
- b) Ghashiram Kotwal\*
- c) Mahadji Bhosle
- d) Raja Kelkar

8. Which of the following is not graphic Design Software?

- a) Gimp
- b) Coreldraw
- c) Adobe Illustrator
- d) VUE\*

9. What is in the image?




- a) Ashtray
- b) Lighter
- c) Tape dispenser\*
- d) Screwdriver

10. What is the product in the image?




- a) Lighter
- b) Salt and pepper\*
- c) Paperweight
- d) Telephone charger

11. Which is the root of the image shown?



- a) China\*
- b) Egypt
- c) India
- d) USA

12. What could the image mean?



- a) Recycle
- b) Resend
- c) Reply\*
- d) Return

13. Which is not associated with digital music?

- a) Sample
- b) Alpha channel\*
- c) Mastering
- d) Mixing

14. Identify the image?



- a) Mayo clinic
- b) Coca cola\*
- c) Morgan and Stanley

d) Wall street

15. What is the principle of recording and playback in a cassette player?

- a) Magnetism
- b) Electric magnetism
- c) Electromagnetism\*
- d) Electron magnetism

16. What is the name of the technology in cell phones, which allows it to track motion?

- a) Accelerometer\*
- b) Transmogrifier
- c) Quad Chip
- d) Antenna

17. The sculpture of David was created by ...

- a) Leonardo Da Vinci
- b) Rafael
- c) Michelangelo\*
- d) Mantegna

18. Based on the given image, which option do you think make sense to you?



- a) Cone cells in retina cannot sense water molecules
- b) Human eye is not efficient in seeing water
- c) The given photo is a frozen moment, hence not a real representation of seeing\*
- d) Processing the image in brain is slower

19. Which of these doesn't make sense to you?


- a) Snakes cannot see
- b) Dogs cannot see red shades
- c) Fish sleeps with eyes open
- d) Bee can see movements in a faster rate than humans\*

20. How many shades are there in the picture?



- a) 2
- b) 6
- c) 4\*
- d) 3

21. How many light sources are there in the picture?



- a) 3
- b) 1\*
- c) 4
- d) 3

22. The given image has a shade range of ....



- a) Red to yellow\*
  - b) Orange to brown
  - c) Black to white
  - d) Red to orange
23. Of the given choices, which is the odd example for vision?
- a) Human
  - b) Dog
  - c) Rabbit
  - d) Snake\*
24. Which of the following was a unique feature of sophisticated civilization found in the ruins of the Indus Valley Civilization?
- a) Sculpture
  - b) Concealed plumbing\*
  - c) Dockyards
  - d) Fashion
25. Who started the computer company Apple along with Steve Jobs?
- a) John Sculley
  - b) Lee Iacocca
  - c) Steve Wozniak\*
  - d) John Powell
26. What was the name of the older script for Marathi, before it was given up for devnagari?
- a) Siddham
  - b) Modi\*
  - c) Prakrit

d) Pali

27. If the colour shown is a mix of Blue, Red and Yellow, the values appear to be?



- a) Blue 200% - Red 20% - Yellow 20%
- b) Blue 50% - Red 100% - Yellow 0%
- c) Blue 80% - Red 90% - Yellow 0% \*
- d) Blue 0% - Red 60% - Yellow 40%

28. The Measuring Ruler was invented by which Culture?

- a) Mesopotamian
- b) Indus Valley\*
- c) Assyrian
- d) Ancient Greece

29. Which one of the following colours would be considered the warmest colour?

- a) Green
- b) Blue
- c) Purple
- d) Yellow\*

30. What do you think is not associated with digital storage media?

- a) GB
- b) SD
- c) MB
- d) ML\*

31. If the colour shown is a mix of Blue, Red and Yellow, the values appear to be?



- a) Blue 0% - Red 20% - Yellow 10%
- b) Blue 0% - Red 100% - Yellow 20%
- c) Blue 80% - Red 0% - Yellow 80%
- d) Blue 0% - Red 50% - Yellow 80% \*

32. What do you think is only associated with moving imagery?

- a) Frames per second\*
- b) Resolution
- c) Compress
- d) Export

33. Which of these is not associated with video?

- a) MP4
- b) WMV
- c) JPEG\*
- d) WAV

34. Suggest a logical order of the bottles shown?



- a) b-c-a
- b) c-a-b\*
- c) a-b-c
- d) c-b-a

35. Raja Ravi Verma was famous for his ...

- a) Lithographs\*
- b) Woodcuts
- c) Calligraphy
- d) Bharatnatyam Skills

36. Which Indian Painter used to paint Film posters in his early days?

- a) M.F. Hussain\*
- b) Vasudev Gaitonde
- c) Jehangir Sabavala
- d) Amrita Sher Gill

37. Describe the image shown?



- a) Bright areas shown in black
- b) Reverse image
- c) Bright areas are made brighter\*
- d) Incorrect image

38. What is represented in the picture?



- a) Lizard
- b) Crocodile
- c) Frog
- d) Snake\*

39. Which term would you associate with designing a new product?

- a) Modeling
- b) Prototyping
- c) Sketching
- d) All of the above\*

40. Which part of India do you think the shown architecture belongs to?



- a) Punjab
- b) Rajasthan\*
- c) Karnataka
- d) Orissa

41. An old computer game: what was the limitation for the jaggy lines?



- a) Screen brightness
- b) Data processing\*
- c) Beauty of broken lines
- d) Ignorance

42. How many shades of Green are in the picture?



- a) 5
- b) 3
- c) 8

d) More than 8\*

43. Which famous architect is associated with the design of Chandigarh city?

- a) Le Corbusier\*
- b) Ludwig Mies Van Der Rohe
- c) Sir John Galt
- d) B. V. Doshi

CAREERS360

44. How would you comment on the game screen shown?



- a) Symmetry
- b) Navigational
- c) Explorative
- d) All of the above\*

45. Which statement makes more sense?



- a) Expressing through text\*
- b) Play
- c) Huge market
- d) Imagination

46. Of the given choices, which is the odd example for interacting with computers?

- a) Touch
- b) Text\*
- c) Gesture
- d) Talk

47. Of the given choices, which is the odd example for vision?

- a) House fly\*
- b) Human
- c) Dog

d) Cow

CAREERS360

48. Which of these is a famous painting by Salvadore Dali?

- a) Jumping Horse
- b) The Vagabond
- c) Persistence of Memory\*
- d) The Kiss

49. How will you comment on the furniture?



- a) The frame below is not fitting
- b) Frame below is fitting\*
- c) Frame below is not balanced
- d) Frame below is not stable

50. Which is the appropriate description?




- a) Icon of a lens
- b) Sign of progress and magnify\*
- c) Icon of mathematics
- d) None

51. Of the given choices, which is associated with Fashion?

- a) Production of raw materials
- b) Retail sales

- c) Advertising
- d) All of the above\*

52. Which is the stop traffic sign?



- a) Circle
- b) Octagon\*
- c) Triangle
- d) None of the above

53. Which component makes a restaurant appropriate other than food?



- a) Furniture
- b) Ceiling light
- c) Windows
- d) All of the above\*

54. The restaurant looks tall in photo. The factor, which makes this assumption, is ...



- a) The window height is not shown\*
- b) Tablecloth is white
- c) Number of tables is less
- d) None of the above

CAREERS360

55. In this truck painting, what do you observe?



- a) Influence of movies
- b) Influence of nature
- c) Influence of symmetry
- d) All of the above\*

56. The first impression of the image shown in terms of human expression ...



- a) Some what happy
- b) Very happy\*
- c) Mischievous
- d) None

57. Most important design problem in Hoardings is ...

- a) Too much words\*
- b) Too much space
- c) Too much colour
- d) Too big image

58. What is shutter speed in camera?

- a) Duration of holding the click
- b) The speed at which the camera operates in taking a picture
- c) The speed at which the camera captures the light\*

d) The speed of taking pictures

59. Choose appropriate comment on the lamp shown?



- a) Mix of materials\*
- b) Shade is out of proportion
- c) Height is inappropriate
- d) Bulb is missing

60. What is CD quality sampling in sound recording?

- a) 44.1 KHz\*
- b) 88.2 KHz
- c) 22.05 KHz
- d) None of the above